



صف المستقيمات ،
اختر الإجابة الصحيحة :



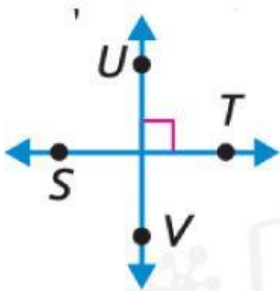
..... \overline{DM} و \overline{RK}



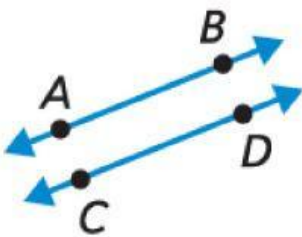
..... \overline{EH} و \overleftrightarrow{PB}



..... \overleftrightarrow{CF} و \overleftrightarrow{YX}



..... \overleftrightarrow{UV} و \overleftrightarrow{ST}



..... \overleftrightarrow{AB} و \overleftrightarrow{CD}