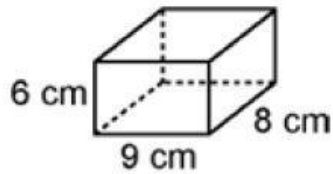


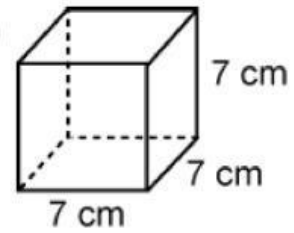
1. Find the surface area of the following objects.

A.



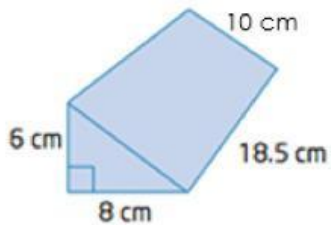
The surface area is \_\_\_\_\_ cm<sup>2</sup>.

C.



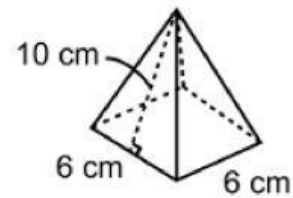
The surface area is \_\_\_\_\_ cm<sup>2</sup>.

B.



The surface area is \_\_\_\_\_ cm<sup>2</sup>.

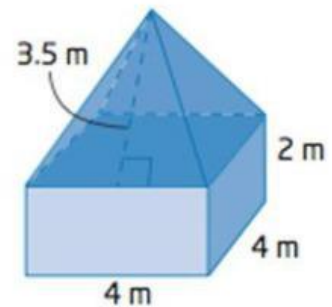
D.



The surface area is \_\_\_\_\_ cm<sup>2</sup>.

2. Solve the following word problems.

A. Adam has built a garden shed in the shape shown. He plans to paint the outside of the shed, including the roof but not the floor. One can of paint cover 4 m<sup>2</sup>. How many cans of paint will Adam need?



He will need \_\_\_\_\_ cans of paint.