

Name: _____

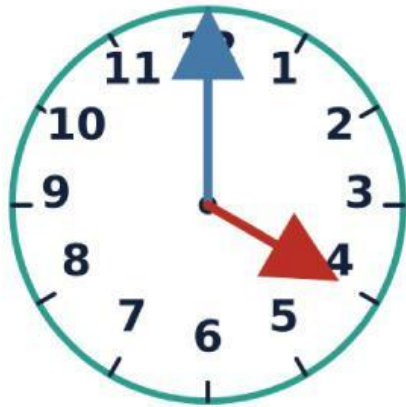
Date: _____

Time: Homework

Tell the Time on Analogue Clocks

Look at the clocks below. What time do they show? Write the time in words (like "quarter past 3" or "half past 7").


Remember: The **short hand** is the hour hand, and the **long hand** is the minute hand.



1.



2.



3.



4.

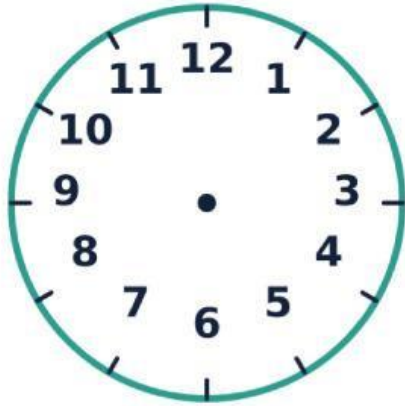
Matching Analogue and Digital Clocks

Match the times in words to their correct digital time.

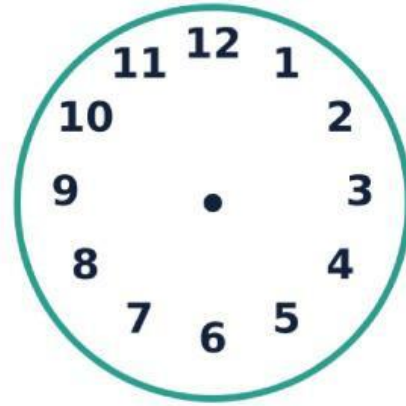
- | | | |
|-----------------------|----------|----|
| 1. Half past eight | a) 08:15 | 1. |
| 2. Quarter past eight | b) 08:30 | 2. |
| 3. Quarter to nine | c) 09:00 | 3. |
| 4. Nine o'clock | d) 08:45 | 4. |

Draw the Hands!

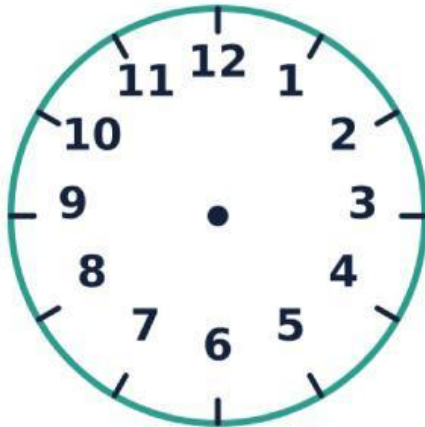
Draw the short hour hand and the long minute hand on the blank clocks to match the digital times shown below.



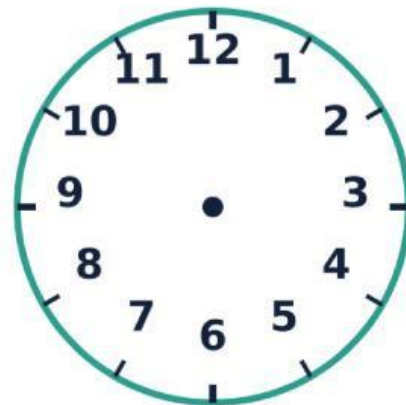
1. 10:15



2. 03:45



3. 07:30



4. 12:00

My Favorite Time of Day

Think about your favorite time of day. It could be recess, time to go home, or family dinner time!

1. Write the time it happens in words:
2. Write the digital time:
3. What do you do at this time?



.....

.....

.....

.....

.....

.....

.....

.....

.....