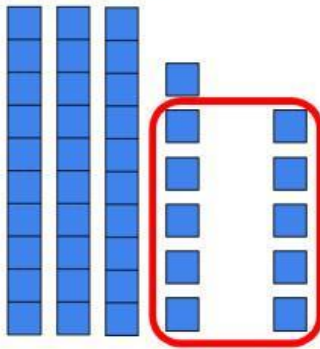


On My Own

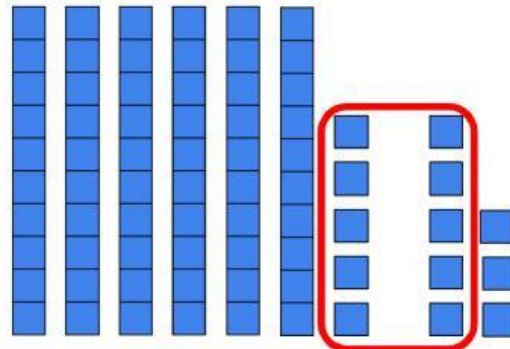
Name _____

What is the sum? Show regrouping 10 ones as 1 ten.

1. $36 + 5 =$ _____



2. $65 + 8 =$ _____



What is the sum?

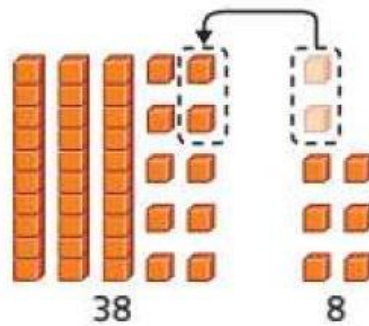
3. $82 + 9 =$ _____

4. $6 + 79 =$ _____

5. $58 + 4 =$ _____

6. $7 + 47 =$ _____

7. **Error Analysis** Marion uses blocks to add $38 + 8$.



Marion says the sum is 48. How can you help Marion add correctly?

8. **Extend Your Thinking** Write an addition problem where you have to regroup to add. Then explain how to solve your addition problem.

Reflect

How can you regroup to add ones to a number?

Math is... Mindset

Why is it important to share your thinking clearly?

Copyright © McGraw-Hill Education