


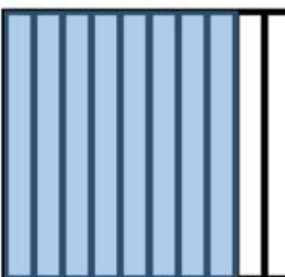
Name _____
Grade:4/ _____


Understand Tenths and Hundredths

What fraction does the grid represent?









How can you express the fraction as an equivalent fraction with a denominator of 10 or 100? Complete the equation.

5. $\frac{70}{100} = \frac{7}{\square}$

6. $\frac{\square}{100} = \frac{5}{10}$

7. $\frac{2}{10} = \frac{\square}{\square}$

8. $\frac{\square}{\square} = \frac{60}{100}$

9. Which of these are equivalent to a fraction with a denominator of 10? Choose all that apply.

A $\frac{3}{100}$

C $\frac{10}{100}$

B $\frac{25}{100}$

D $1\frac{40}{100}$