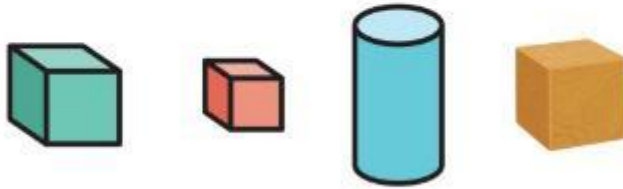


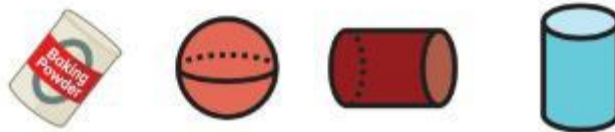
Name _____

Circle all the correct answers for the question.

1. Which are cubes?



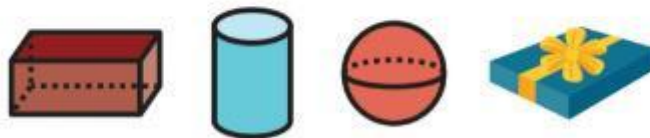
2. Which are cylinders?



3. Which are cones?



4. Which are rectangular prisms?



5. **STEM Connection** Riley makes a car using blocks. Are blocks 3-dimensional shapes? Tell how you know.



6. Which 3-dimensional shape has faces?
A. cube
B. cone
C. cylinder
D. sphere
7. **Extend Your Thinking** Violet says a cone is the same as a cylinder. Do you agree? Explain.

Reflect

What defining attributes do 3-dimensional shapes have?

Math is... Mindset

How have you shown that you value the ideas of others?