

Nombre: _____

¿Cómo he trabajado?

Fecha: _____ Curso: _____



Une cada suma con su multiplicación.

$3 + 3$

3×4

$3 + 3 + 3 + 3 + 3$

3×2

$3 + 3 + 3 + 3$

3×6

$3 + 3 + 3 + 3 + 3 + 3 + 3$

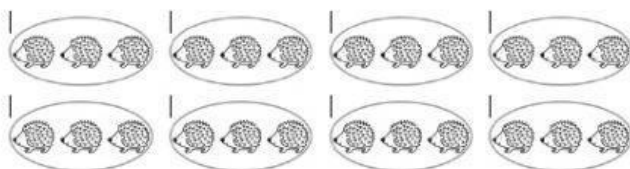
3×7




Escribe estas situaciones de suma como multiplicación.



$\rightarrow \square \times \square = \square$



$\rightarrow \square \times \square = \square$




$\rightarrow \square \times \square = \square$



Señala la opción correcta.

10




2×5

2×4

2×6

8




2×0

2×4

2×3

14




2×8

2×7

2×2

12




2×6

2×5

2×7

6



2×6

2×9

2×3

18



2×10

2×7

2×9