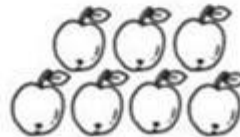








# Most and least

Circle the set with the most items in it.



Circle the set with the least items in it.



## Estimating Weight: Heavier or Lighter

Complete the following statements by selecting the correct answer from the drop-down list.

The apple is \_\_\_\_\_ than the cherry.



The bee is \_\_\_\_\_ than the honey.



The broccoli is \_\_\_\_\_ than the tree.



The hen is \_\_\_\_\_ than the corn.

