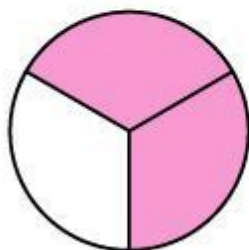


Name : \_\_\_\_\_

Score : \_\_\_\_\_ Date : \_\_\_\_\_

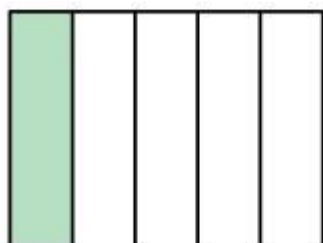
## Identifying Fractions

1



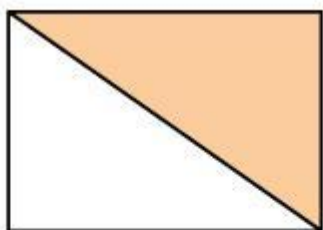
- $\frac{1}{2}$    $\frac{2}{3}$    $\frac{3}{4}$

2



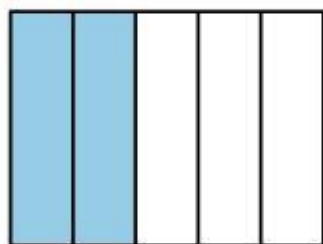
- $\frac{2}{5}$    $\frac{1}{6}$    $\frac{1}{5}$

3



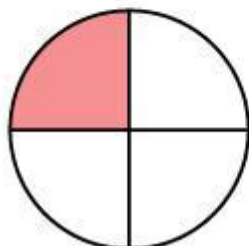
- $\frac{1}{3}$    $\frac{1}{2}$    $\frac{3}{4}$

4



- $\frac{2}{5}$    $\frac{1}{2}$    $\frac{1}{2}$

5



- $\frac{4}{5}$    $\frac{1}{3}$    $\frac{1}{4}$