




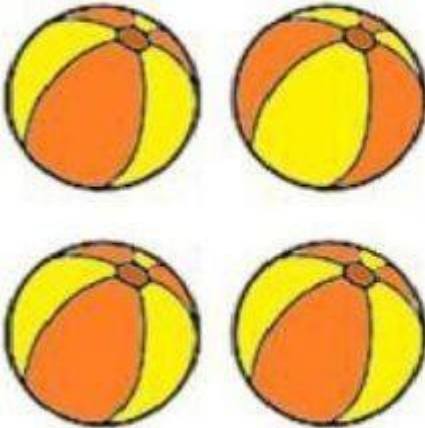


Escoje la cantidad que corresponde a la cantidad de elementos y únala mediante una línea

	<p>①</p> <p>②</p> <p>③</p>		<p>①</p> <p>②</p> <p>③</p>
	<p>②</p> <p>③</p> <p>④</p>		<p>②</p> <p>③</p> <p>④</p>
	<p>③</p> <p>④</p> <p>⑤</p>		<p>③</p> <p>④</p> <p>⑤</p>