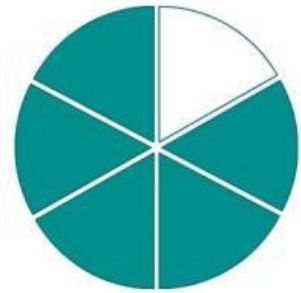
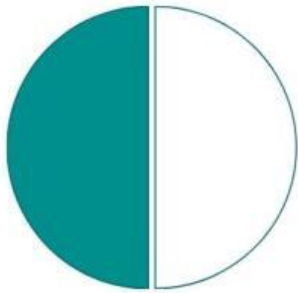
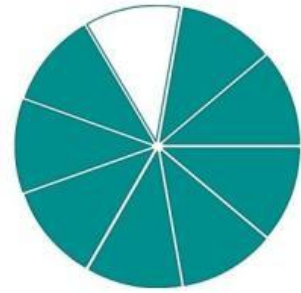
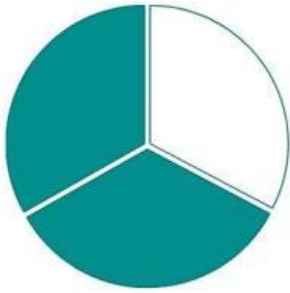


# ***Relaciona la fracción correcta***

**Une la fracción con la imagen correcta**



$$\frac{1}{3}$$

$$\frac{1}{6}$$

$$\frac{1}{9}$$

$$\frac{1}{2}$$

