



Date : -----

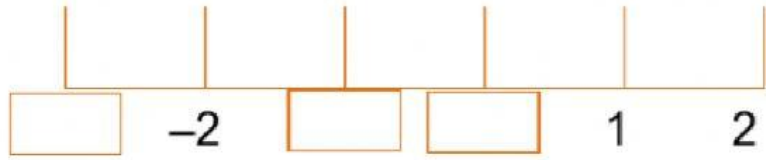
Name : -----

Mathematics

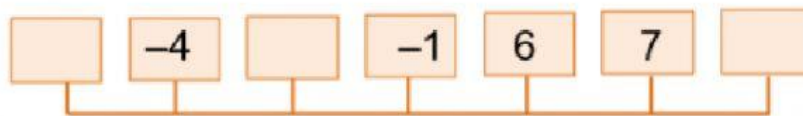
Y 5/ A/B

Revision Sheet #1

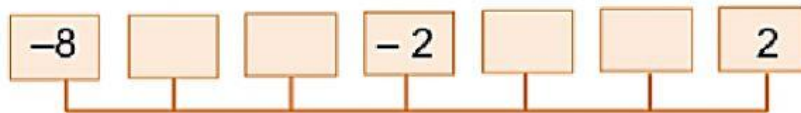
Q1- Complete the number line.



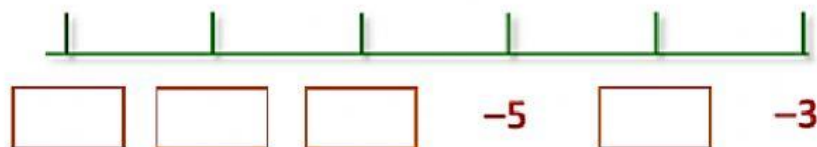
Q2- Put the numbers on the number line



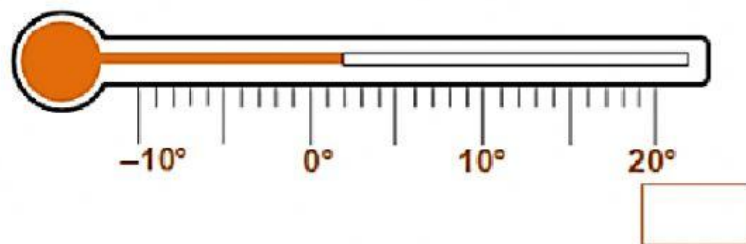
Q3- Put the numbers on the number line



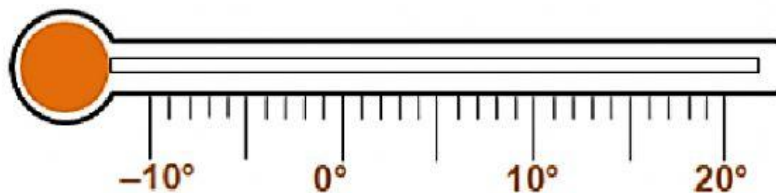
Q4- Complete the number line.



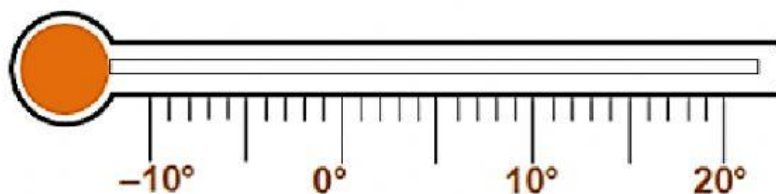
Q5- What is 8°C colder than the thermometer reading.



Q6- Today it is 4°C . Tomorrow it will be 6°C colder.
Mark tomorrow's temperature on the thermometer.



Q7- Today it is 13°C . Tomorrow it will be 16°C colder.
Colour tomorrow's temperature below.



Q8- Here is part of a number line.

It is divided into equal sections.

Write the missing numbers in the boxes.

