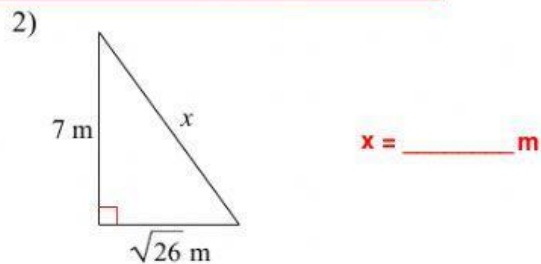
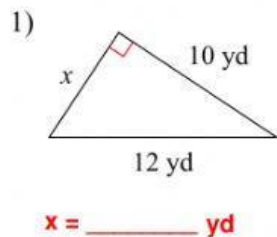
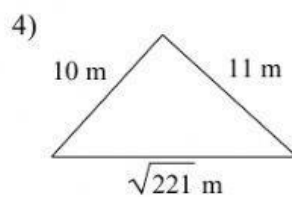
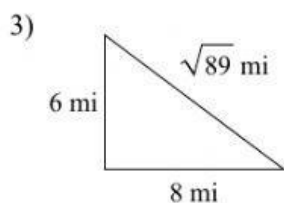


10.1-10.2 Lesson Check

Find the missing side of each triangle. **Leave your answers in simplest radical form.**



State if each triangle is acute, obtuse, or right.



Find the missing side lengths. **Leave your answers as radicals in simplest form.**

