

Name: \_\_\_\_\_ Date: \_\_\_\_\_

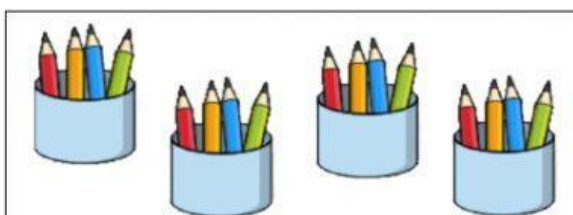


# Multiplication

(equal groups)




Write the multiplication sentence for each picture.



\_\_\_\_\_ x \_\_\_\_\_ = \_\_\_\_\_



\_\_\_\_\_ x \_\_\_\_\_ = \_\_\_\_\_



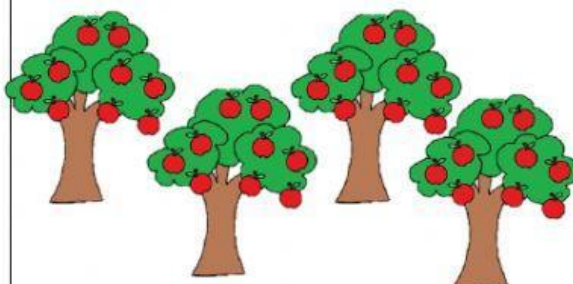
\_\_\_\_\_ x \_\_\_\_\_ = \_\_\_\_\_



\_\_\_\_\_ x \_\_\_\_\_ = \_\_\_\_\_



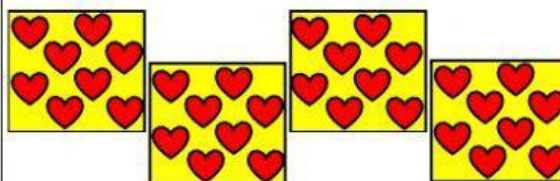
\_\_\_\_\_ x \_\_\_\_\_ = \_\_\_\_\_



\_\_\_\_\_ x \_\_\_\_\_ = \_\_\_\_\_



\_\_\_\_\_ x \_\_\_\_\_ = \_\_\_\_\_



\_\_\_\_\_ x \_\_\_\_\_ = \_\_\_\_\_