

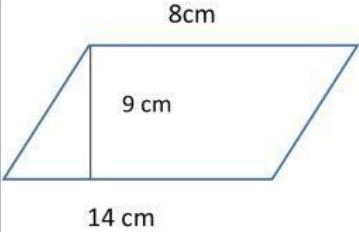
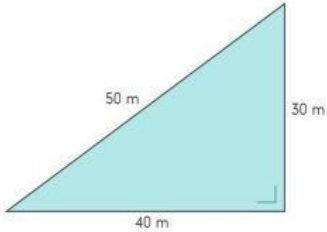
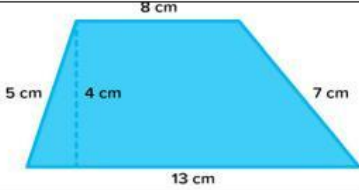
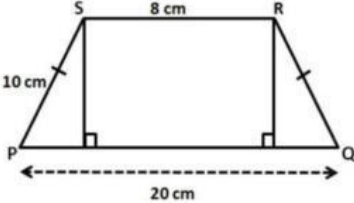
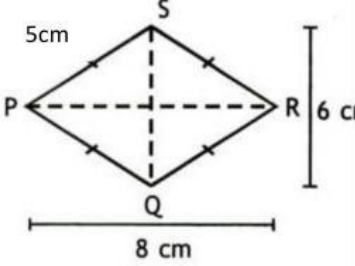
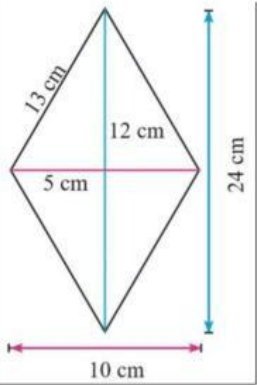
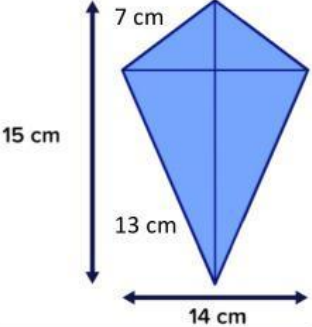
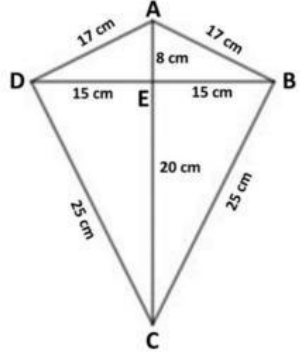


Nama :

Kelas :

HITUNGLAH LUAS DAN KELILING SOAL BERIKUT INI!

No	Gambar	Rumus	Luas	Keliling
1		$L = p \times l$ $K = (p + l) \times 2$		
2		$L = s \times s$ $K = s \times 4$		
3		$L = a \times t$ $K = (a + b) \times 2$		
4		$L = a \times t : 2$ $K = a + b + c$		
5		$L = (a + b) \times t : 2$ $K = a + b + c + d$		
6		$L = (a + b) \times t : 2$ $K = a + b + c + d$		

7		$L = d_1 \times d_2$ $K = s \times 4$		
8		$L = d_1 \times d_2$ $K = s \times 4$		
9		$L = d_1 \times d_2$ $K = (a + b) \times 2$		
10		$L = d_1 \times d_2$ $K = (a + b) \times 2$		