

LKPD

Matematika

luas segitiga

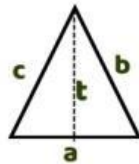
Nama kelompok : _____

Kelas : _____



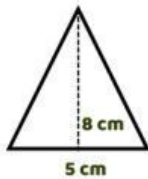
LUAS SEGITIGA

Rumus

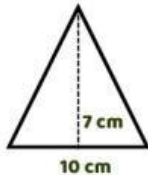


$$L = \frac{1}{2} a \times t$$

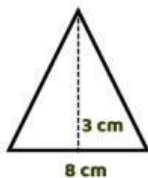
Hitung luas bangun datar di bawah ini!



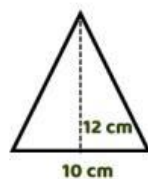
$$L = \frac{1}{2} \square \times \square$$
$$= \square$$



$$L = \frac{1}{2} \square \times \square$$
$$= \square$$



$$L = \frac{1}{2} \square \times \square$$
$$= \square$$



$$L = \frac{1}{2} \square \times \square$$
$$= \square$$

Tentukan luas bangun datar segitiga di bawah ini dengan petak satuan!

