

SISTEMA DE NUMERAÇÃO DECIMAL

01 - MARQUE CADA VALOR CORRESPONDENTE.

43

D	U

28

D	U

79

D	U

91

D	U

14

D	U

02 - ESCREVA O **ANTECESSOR** E O **SUCCESSOR** DOS NÚMEROS.

	55	
	17	
	40	

	21	
	5	
	2	

	99	
	30	
	15	

03 - LEIA E ESCREVA OS NÚMEROS CORRESPONDENTES:

VINTE E TRÊS - _____

TREZE - _____

DEZOITO - _____

VINTE E SEIS - _____

SETE - _____

QUARENTA E DOIS - _____

QUINZE - _____

TRINTA E TRÊS - _____

TRINTA - _____

ZERO - _____

SESSENTA - _____

DEZ - _____

04 - COMPONHA OS NÚMEROS:

6 UNIDADES - _____

8 DEZENAS - _____

1 DEZENA + 2 UNIDADES - _____

1 DEZENA + 7 UNIDADES - _____

1 DEZENA + 5 UNIDADES - _____

2 DEZENAS - _____

2 DEZENAS + 4 UNIDADES - _____

2 DEZENAS + 6 UNIDADES - _____

3 DEZENAS + 5 UNIDADES - _____

3 DEZENAS + 8 UNIDADES - _____

4 DEZENAS + 4 UNIDADES - _____

5 DEZENAS + 9 UNIDADES - _____

5 DEZENAS + 3 UNIDADES - _____

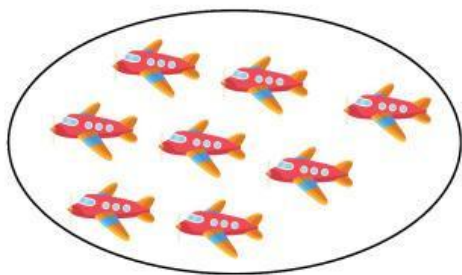
6 DEZENAS + 1 UNIDADE - _____

6 DEZENAS + 8 UNIDADES - _____

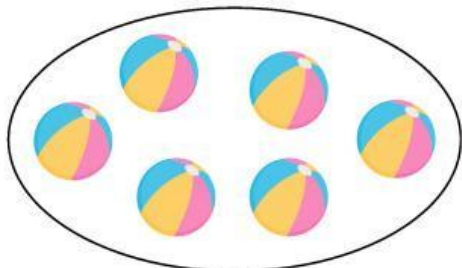
7 DEZENAS + 2 UNIDADES - _____

8 DEZENAS + 7 UNIDADES - _____


05 - CONTE E ESCREVA A QUANTIDADE:




D	U



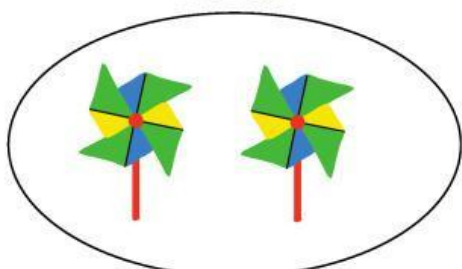
D	U



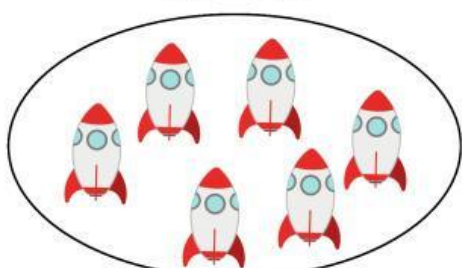
D	U



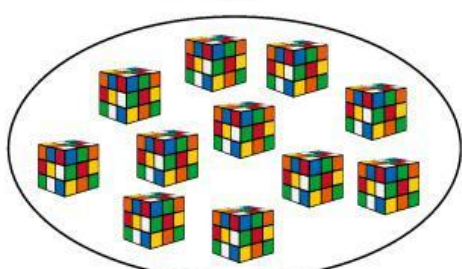
D	U



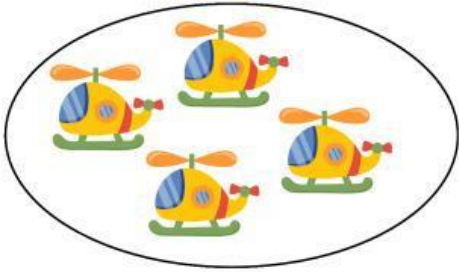
D	U



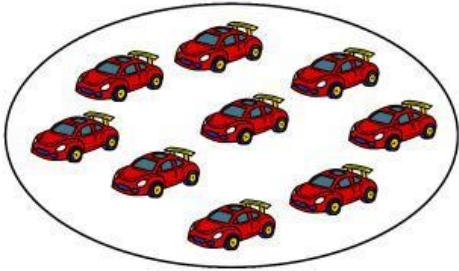
D	U




D	U




D	U



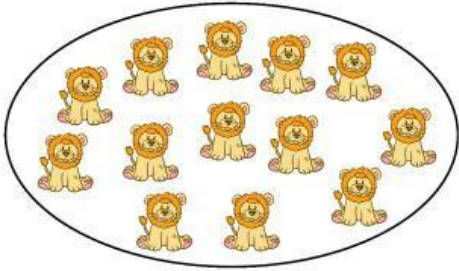
D	U




D	U



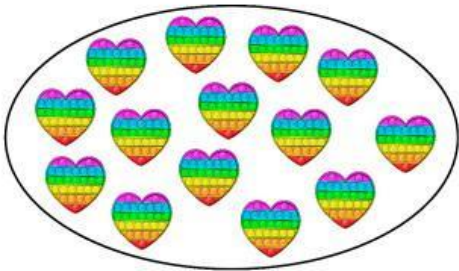
D	U



D	U



D	U



D	U