

4.5a Rotate vs. Revolve

jamiehayes@spsk12.net [Switch account](#)



* Indicates required question

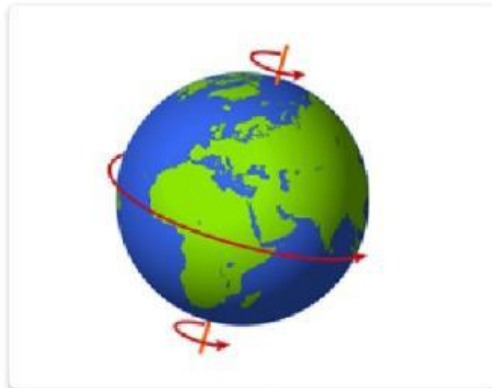
Email *

☐


Record jamiehayes@spsk12.net as the email to be included with my response

Which diagram shows rotation? *

1 point



☐ A



☐ B

Why does the sun appear to move across the sky? *

1 point

- ☐ the sun orbits the Earth
- ☐ The Earth is tilted on its axis.
- ☐ The sun rotates on its axis.
- ☐ The Earth rotates on its axis.

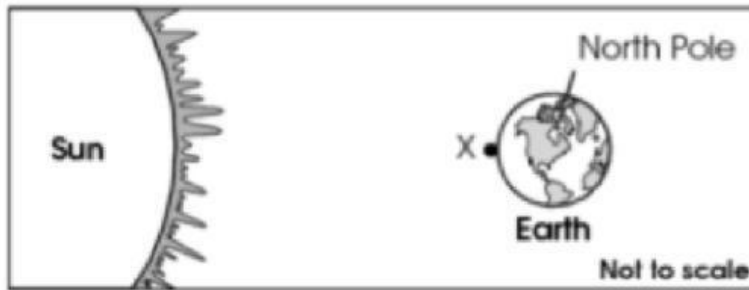


It is currently daytime at point X shown on Earth.

★ 1 point

Which statement explains why it will be nighttime at point X after 12 hours?

Earth and Sun



- ☐ Earth is tilted on its axis
- ☐ Earth has a round shape
- ☐ Earth orbits the sun
- ☐ Earth rotates on its axis

Submit

Clear form

This form was created inside of Suffolk Public Schools. [Report Abuse](#)

Google Forms



rotation	revolution



