


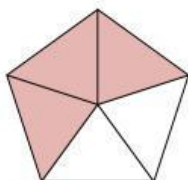
Nama: _____

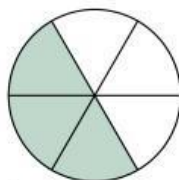
Kelas : _____

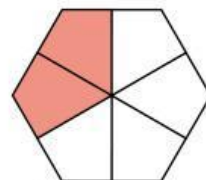
PECAHAN

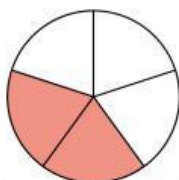
Instruksi: Pasangkanlah pecahan dari bagian yang diarsir pada gambar!

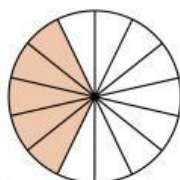


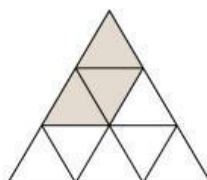


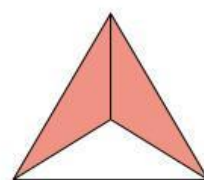




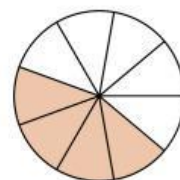


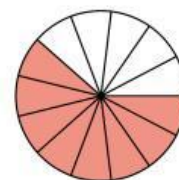


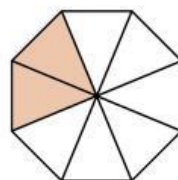












$$\frac{2}{6}$$

$$\frac{2}{5}$$

$$\frac{5}{14}$$

$$\frac{2}{8}$$

$$\frac{3}{9}$$

$$\frac{7}{10}$$

$$\frac{2}{3}$$

$$\frac{3}{6}$$

$$\frac{4}{5}$$

$$\frac{3}{5}$$

$$\frac{4}{9}$$

$$\frac{8}{13}$$