



Tell Addition Stories

✓ Check Understanding

Ask: There are 6 dogs. 3 more dogs join them. How many dogs are there now?

What You Do



Pick a letter.

A

Partner A:



Tell a problem.

There are 6 blue boxes.

There are 2 green boxes.

How many boxes are there in all?

Partner B:



Complete the equation.

$$6 + 2 = \underline{\quad 8 \quad}$$

What You Need

- 10 two-color counters
- Recording Sheet

What You Do

1. Take turns. Pick a letter on the **Recording Sheet**. Look at the picture.
2. Partner A tells an addition story problem about the objects shown in the picture.
3. Partner B uses counters to solve the story problem and complete the equation.

Go Further!

Take turns. Partner A tells a story problem that gives the total but not the numbers. Partner B finds two numbers that make the total.




Tell Addition Stories

Recording Sheet

Partner A

Partner B

A




$$6 + 2 = \boxed{}$$

B




$$4 + 3 = \boxed{}$$

C



$$7 + \boxed{} = 10$$

D



$$5 + \boxed{} = 9$$