

## Task 1 MILD

# Rounding to 10

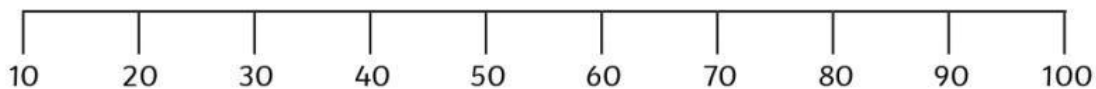
To round numbers to the nearest 10.

1. The multiple of 10 before 17 is

The multiple of 10 after 17 is

17 is closer to

Can you help me collect some space rocks? Colour the correct rock to show your answers.



2. The multiple of 10 before 44 is

The multiple of 10 after 44 is


44 is closer to



3. The multiple of 10 before 85 is

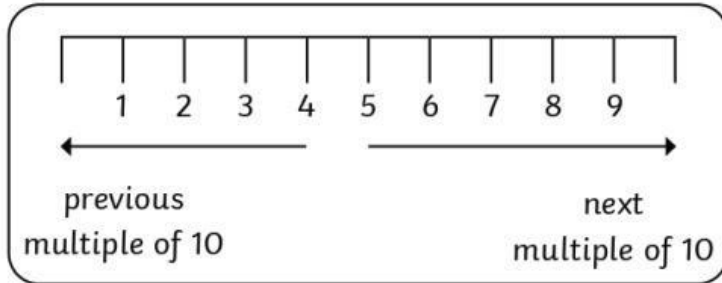
The multiple of 10 after 85 is

85 is closer to



# Rounding to 10

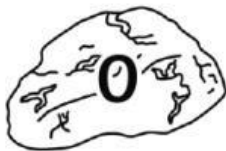
To round numbers to the nearest 10.



Can you help me collect some space rocks? Colour the correct rock to show your answers.



1. Round 17 to the nearest 10.



2. Round 45 to the nearest 10.

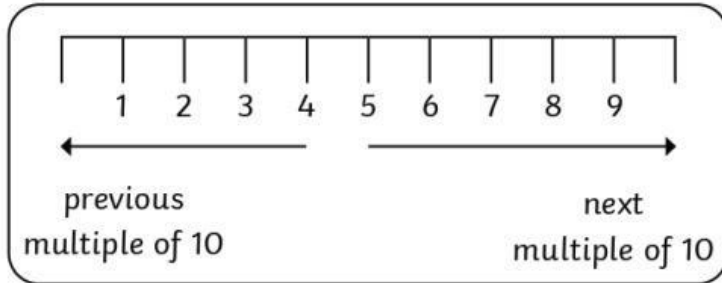


3. Round 27 to the nearest 10.



# Rounding to 10


To round numbers to the nearest 10.



Can you help me collect some space rocks? Colour the correct rock to show your answers.



1. Which space rock will round to 224 when rounded to the nearest 10?



Explain your reasoning \_\_\_\_\_

2. Which space rock will round to 468 when rounded to the nearest 10?



Explain your reasoning \_\_\_\_\_

3. Which space rock will round to 887 when rounded to the nearest 10?



Explain your reasoning \_\_\_\_\_