



LET'S ANSWER - INTERACTIVE ACTIVITY

1:00


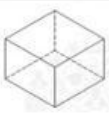

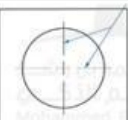

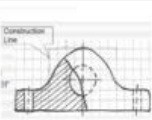


W4- U-
Technical
graphics vs
CAD

Match the description with the correct symbol.

Name:

Class:

Compass 1- -----	Hidden lines 2- -----	Technical graphics 3- -----	Centre lines 4- -----	Set squares 5- -----	Construction lines 6- -----
					
A	B	C	D	E	F
draw vertical and some inclined lines	indicate the centre of a circle, arc, or any symmetrical object.	First lines that you will use in a drawing	used to draw circles and arcs accurately	Graphical representation of an object on paper	to draw features cannot be seen from the view you are looking at



Share a screenshot of your work



WORKSHEET

