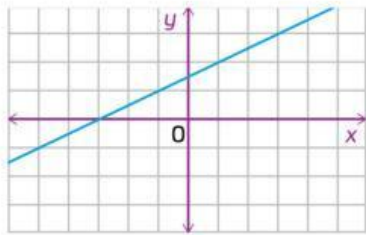
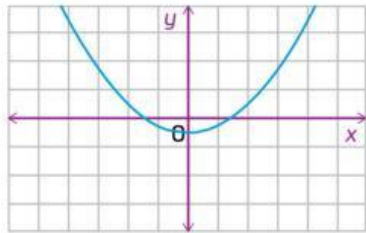
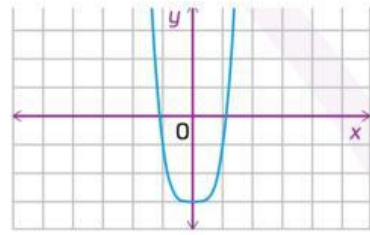


Identifica que ecuación corresponde a cada gráfica, uniéndolo con una línea.



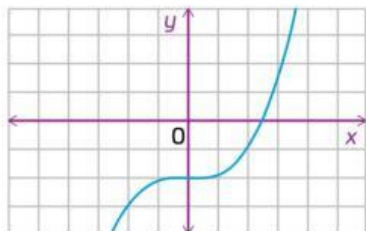
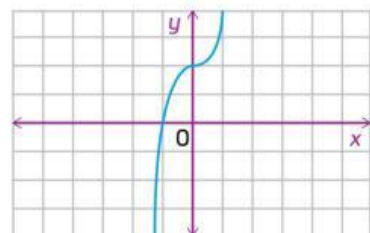
$$y = \frac{x}{2} + \frac{3}{2}$$

$$y = 2x^4 - 3$$



$$y = 3x^5 + 2$$

$$y = \frac{x^2}{4} - \frac{1}{2}$$



$$y = \frac{x^3}{8} - 2$$

$$y = 2x^6 + 1$$

