

Name _____ Date _____

Language worksheet 2A

1 Match the questions to the answers.

Circle the question words.

What time is the football match?

When are the next Olympic games?

How long is the film?

When does the new year start?

How old is your sister?

How quickly can he run 100 metres?

How long is your school year?

How often does she have piano lessons?

In January.

It is about 10 months long.

She is twelve years old.

Twice a week.

At 6 p.m.







About an hour and a half.

In two years' time.

In about eleven seconds.

2 Complete the table.

Circle the analogue times that are p.m.

Digital clock		Analogue clock	
Show	Say	Show	Say
	thirteen fifty		
			Half past two
	Nineteen twelve		
			Quarter past three
	Twenty-one nineteen	