










### WHAT TIME IS IT?

|   |   |   |                                    |
|---|---|---|------------------------------------|
|    | ● | ● | It's a quarter <b>past</b> six.    |
|    | ● | ● | It's a quarter <b>to</b> five.     |
|    | ● | ● | It's half <b>past</b> five.        |
|    | ● | ● | It's ten <b>to</b> four.           |
|  | ● | ● | It's twenty five <b>to</b> twelve. |
|  | ● | ● | It's twenty <b>past</b> eleven.    |
|  | ● | ● | It's twenty <b>to</b> twelve.      |
|  | ● | ● | It's ten <b>past</b> five.         |
|  | ● | ● | It's five <u>o'clock</u> .         |
|   |   |   |                                    |