

Grade: 1

Name: _____

Subject: Mathematics

Section: _____

Q1. Choose the correct option.

A) _____ has 4 all sides equal in length.

- a) Rectangle b) Triangle c) Square

B) Hexagon has _____ sides.






- a) 7 b) 6 c) 5

C) Identify which shape is it?

- a) Square
b) Triangle
c) Pentagon



Q2 Match 2-D Shapes with their real life object.

Hexagon	
Pentagon	
Rectangle	
Circle	
Triangle	

Q3 What comes next?

