






Data: 16 de março de 2021.

Aluno:

### Atividades de Matemática

1- Escreva o antecessor e o sucessor de cada número.



2- Resolva as continhas de adição.

6	2	5	7	3	8	4	1
+1	4	+4	2	+2	1	+1	7



7	8	8	3	1	5	2	6
+1	1	+1	4	+1	3	+2	3