



A. Count and add. One has been done for you :



$$\begin{array}{r} 6 \\ + 3 \\ \hline 9 \\ \hline \end{array}$$




$$\begin{array}{r} 3 \\ + 5 \\ \hline \\ \hline \end{array}$$




$$\begin{array}{r} 5 \\ + 2 \\ \hline \\ \hline \end{array}$$



$$\begin{array}{r} 4 \\ + 2 \\ \hline \\ \hline \end{array}$$



$$\begin{array}{r} 3 \\ + 2 \\ \hline \\ \hline \end{array}$$



$$\begin{array}{r} 8 \\ + 1 \\ \hline \\ \hline \end{array}$$