

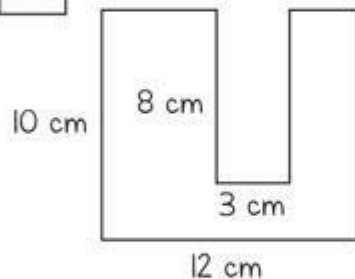
Name: _____

Date: _____

Perimeter & Area

Find the perimeter and area of the following compound shapes.

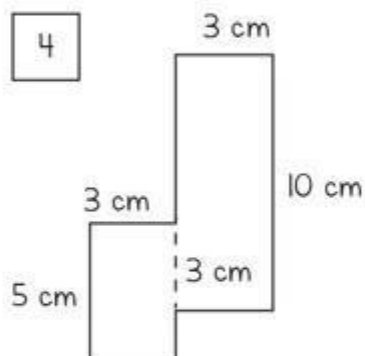
1



Perimeter: _____

Area: _____

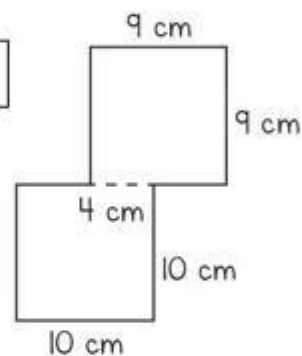
4



Perimeter: _____

Area: _____

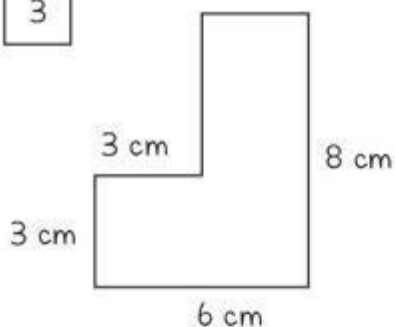
7



Perimeter: _____

Area: _____

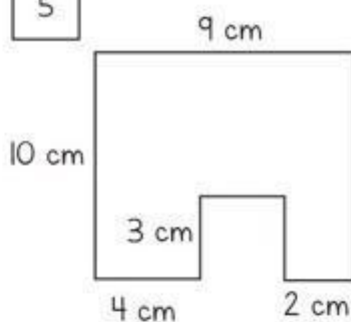
3



Perimeter: _____

Area: _____

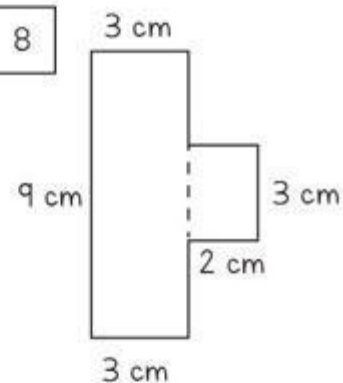
5



Perimeter: _____

Area: _____

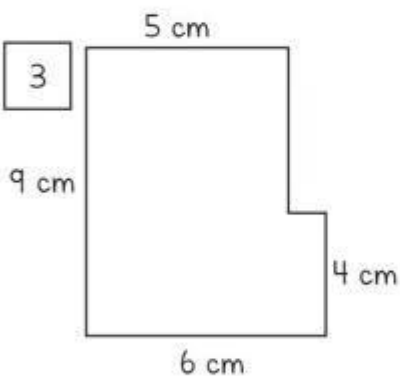
8



Perimeter: _____

Area: _____

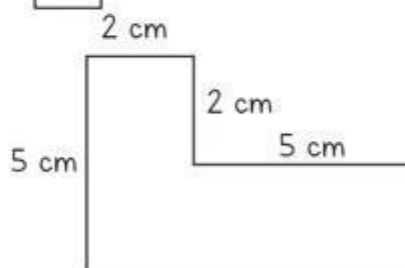
3



Perimeter: _____

Area: _____

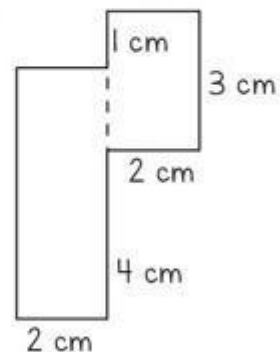
6



Perimeter: _____

Area: _____

9



Perimeter: _____

Area: _____