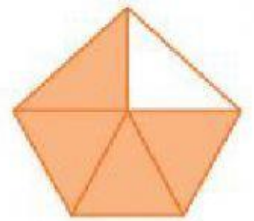






## FRAZIONI E FIGURE

**COLLEGA OGNI FRAZIONE ALLA FIGURA CORRISPONDENTE:  
SONO STATE CONSIDERATE LE PARTI ARANCIONI**



$$\frac{1}{2}$$

$$\frac{5}{8}$$

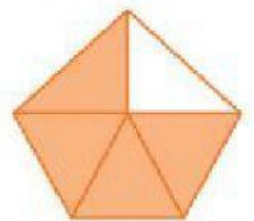

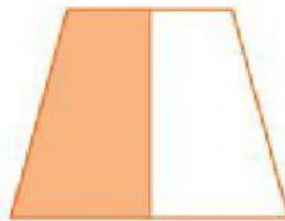
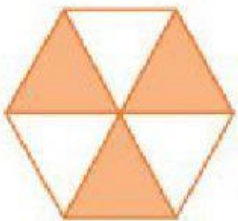
$$\frac{3}{6}$$

$$\frac{4}{5}$$

$$\frac{2}{4}$$

$$\frac{2}{3}$$

**ADESSO LE PARTI CONSIDERATE SONO QUELLE BIANCHE!**



$$\frac{1}{2}$$

$$\frac{3}{8}$$

$$\frac{3}{6}$$

$$\frac{2}{4}$$

$$\frac{1}{5}$$

$$\frac{1}{3}$$