

FRACCIONES

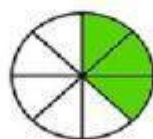
1. Escribe los terminos de las fracciones

$\frac{2}{3}$

→

→

2. Escribe cada fracción que representa la parte coloreada de cada figura



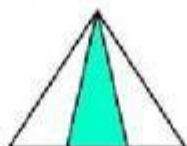
a)



b)



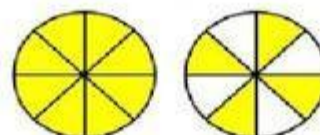
c)



d)

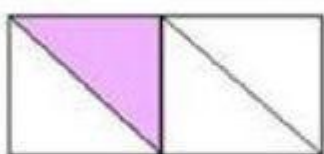


e)

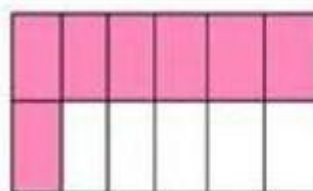


f)

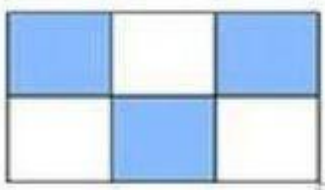
3. Escribe en letra cada fracción representada



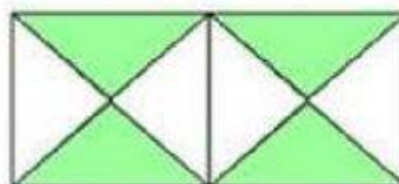
—



—



—



—