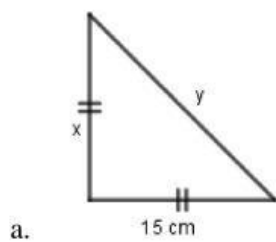


Nama Anggota Kelompok :

.....
.....
.....
.....

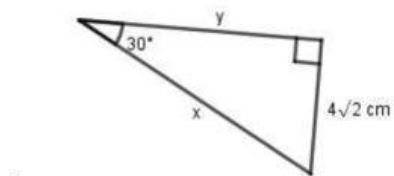
Kerjakanlah soal berikut dengan menggunakan perbandingan sisi segitiga siku-siku istimewa

1. Tentukan nilai x dan y dari gambar berikut



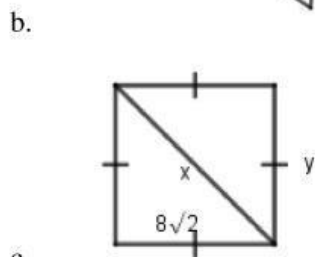
Nilai x =

Nilai y =



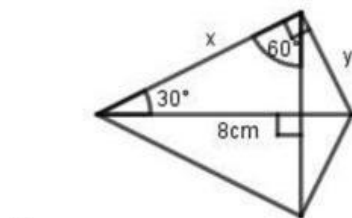
Nilai x =

Nilai y =



Nilai x =

Nilai y =



Nilai x =

Nilai y =