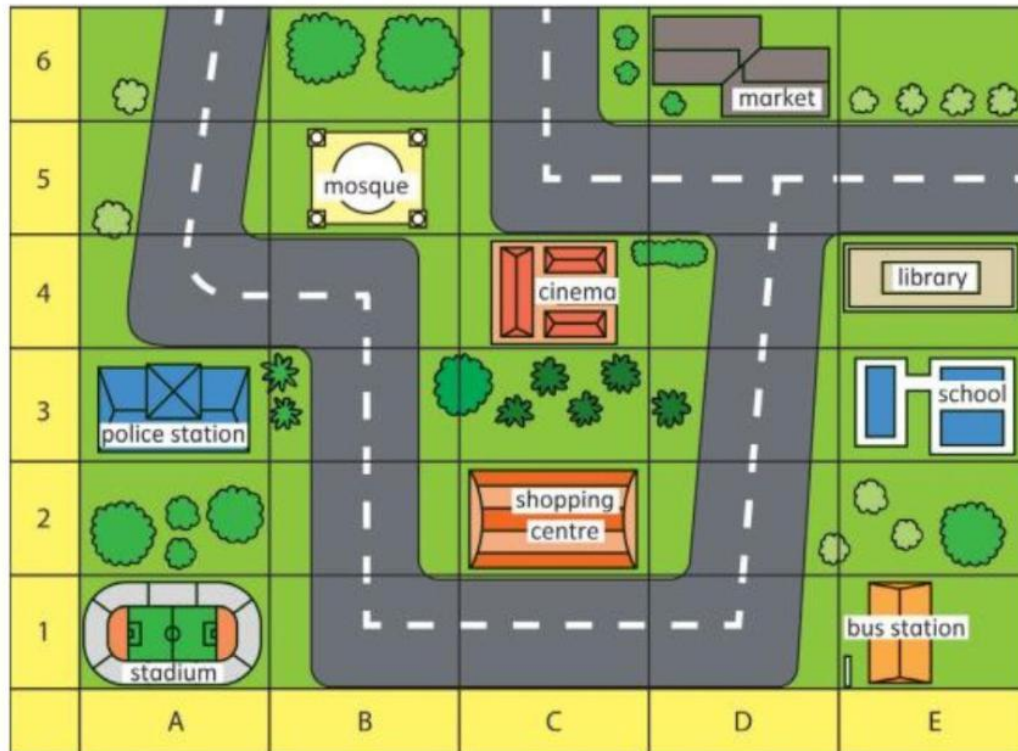


CLASSWORK ON CHAPTER 10 POSITIONS AND DIRECTIONS

1. Use the map to fill in the blank



a) Police station is located at _____.

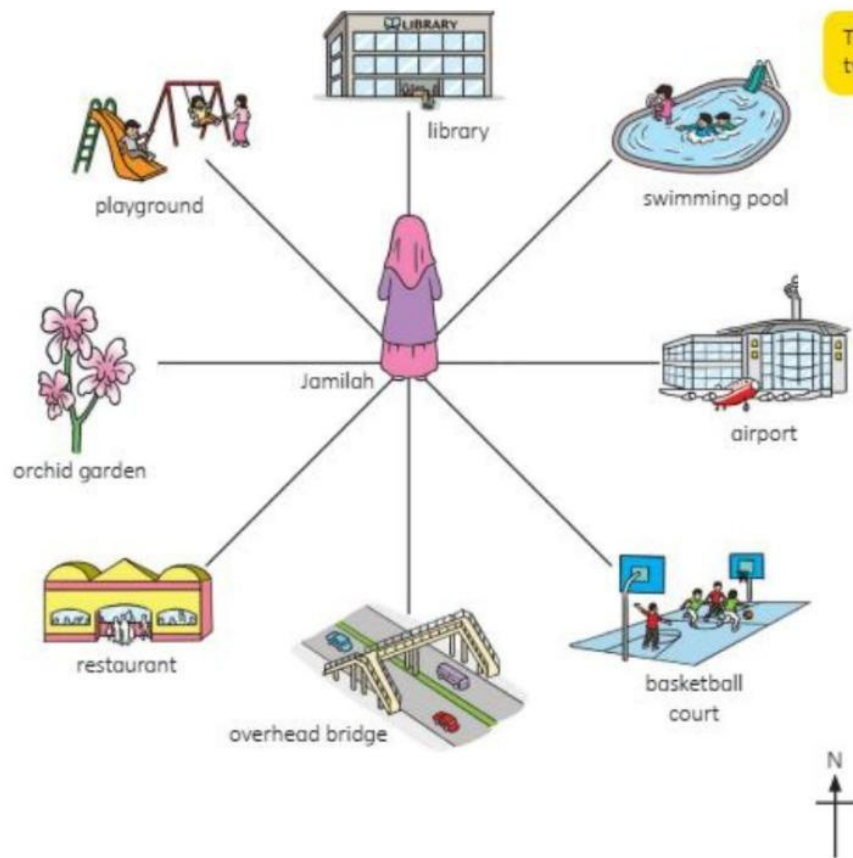
b) School is located at _____.

c) What building is located at (C,2) ? _____.

d) _____ is located at B5.

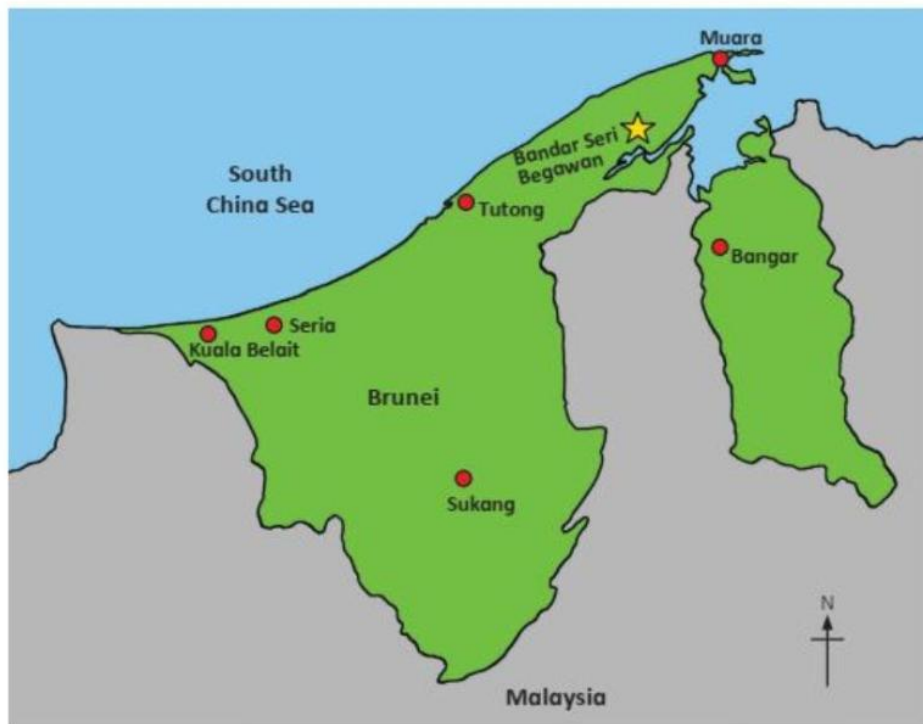
e) _____ is located at (D,6)

2. Jamilah stands in the middle open field. Fill in the blanks to complete the statement.



- a) The restaurant is _____ of Jamilah.
- b) The _____ is south of Jamilah.
- c) The swimming pool is _____ of Jamilah.
- d) The _____ is west of Jamilah.
- e) The Basketball court is _____ of Jamilah.

3. Look at the map of Brunei Darussalam below. We can use 8-compass to find the direction.



- a) Seria is _____ of Kuala Belait.
- b) Sukang is _____ of Seria.
- c) Bandar Seri Begawan is north-west of _____.
- d) _____ is north-east of Bandar Seri Begawan.
- e) _____ is north of Sukang.