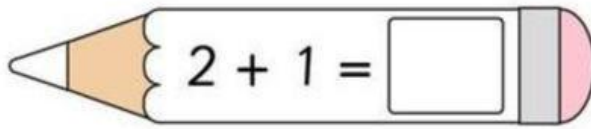
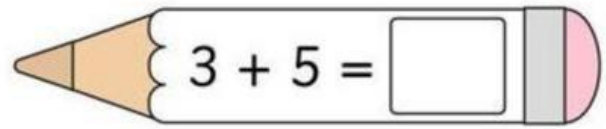
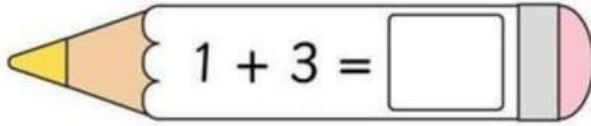
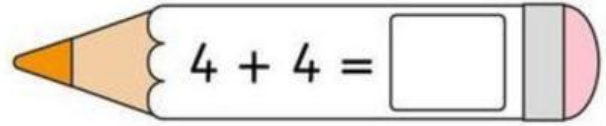


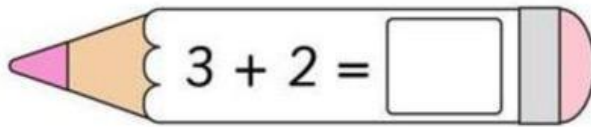
REALIZAR LAS SIGUIENTES SUMAS

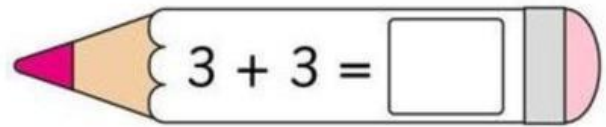
 $2 + 1 = \square$

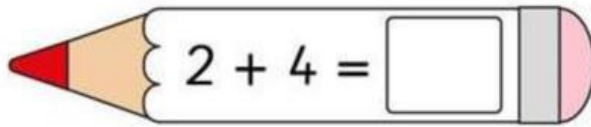
 $3 + 5 = \square$

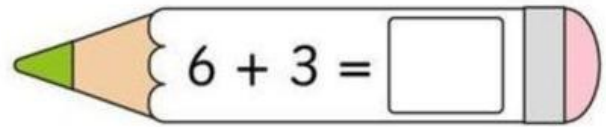
 $1 + 3 = \square$

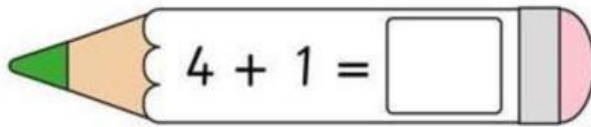
 $4 + 4 = \square$

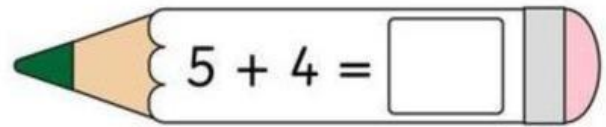
 $3 + 2 = \square$

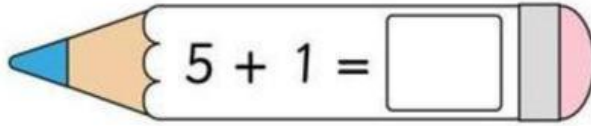
 $3 + 3 = \square$

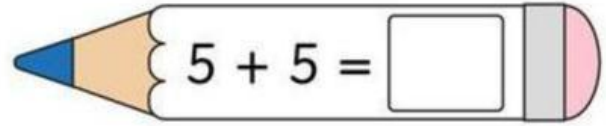
 $2 + 4 = \square$

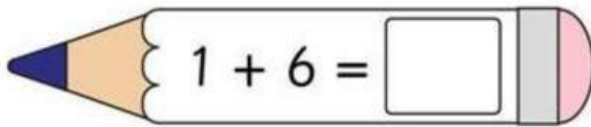
 $6 + 3 = \square$

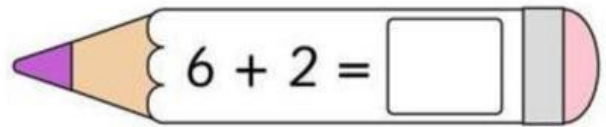
 $4 + 1 = \square$

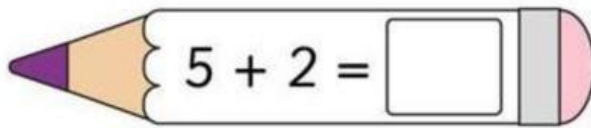
 $5 + 4 = \square$

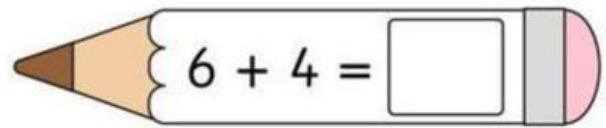
 $5 + 1 = \square$

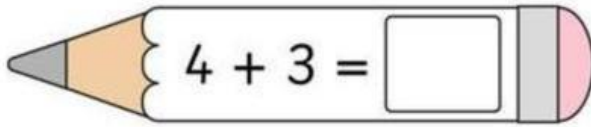
 $5 + 5 = \square$

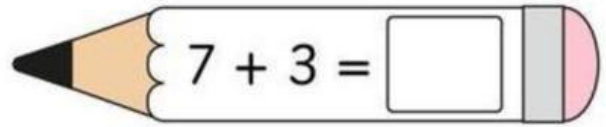
 $1 + 6 = \square$

 $6 + 2 = \square$

 $5 + 2 = \square$

 $6 + 4 = \square$

 $4 + 3 = \square$

 $7 + 3 = \square$