



SAMPLE PAPER

CREST Science Olympiad (CSO)

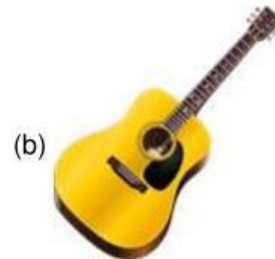
CLASS
Prep/KG

Syllabus for CSO is available at <https://www.crestolympiads.com/cso-syllabus>

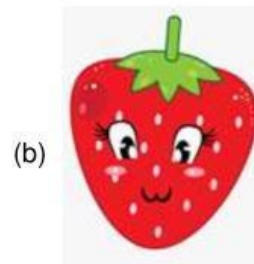

Pattern and Marking Scheme

Class	Topic/Section	No. of Questions	Marks per Questions	Total Marks
	Environmental studies	20	1	20
Prep/KG	Achiever's Section	5	2	10
	Grand Total	25	-	30

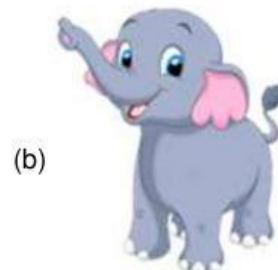
1. Identify the 'Guitar':



2. Identify the fruit that starts with 'B':



3. Which one is a farm animal?





CREST Olympiads – A digital initiative to enhance practical knowledge

4. What we wear on head in winter season?



5. Which food is healthy?



6. Identify the vehicle:



(b) Bus

7. Identify the festival of brother and sister:

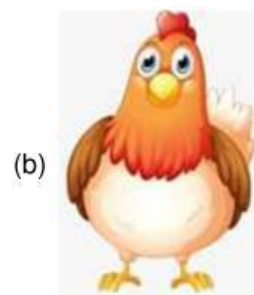


CREST Olympiads – A digital initiative to enhance practical knowledge

8. Where do children go to learn?



9. Select the one who lives in water:



10. Which is the coldest season of the year?


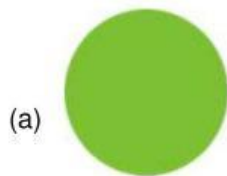


(a) Winter

(b) Summer

CREST Olympiads – A digital initiative to enhance practical knowledge

11. We should cross the road, when the pedestrian crossing signal is:



12. Select the indoor game:



13. Which type of clothes are worn in rainy season?



CREST Olympiads – A digital initiative to enhance practical knowledge

14. Select the vegetable from the given images:




(a) Green Apple



(b) Onion

15. Identify the bad habit:



16. Identify the animal:



(a) Elephant

(b) Zebra

CREST Olympiads – A digital initiative to enhance practical knowledge

17. We walk with our_____.

(a)



(b)



18. Identify the good habit:

(a)



(b)



19. Festival of colours is known as:

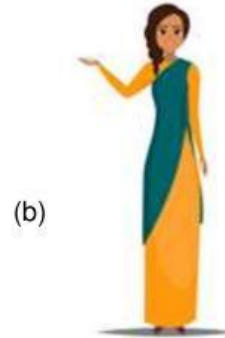
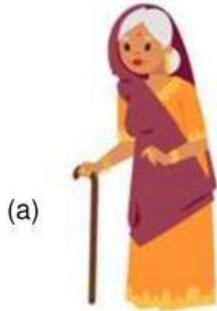


(a) Lohri

(b) Holi

CREST Olympiads – A digital initiative to enhance practical knowledge

20. My father's mother is my _____.



Achiever's Section

21. Bee lives in _____.



(a) Beehive



(b) Nest

22. Which comes out at night?



CREST Olympiads – A digital initiative to enhance practical knowledge

23. Identify the lotus:



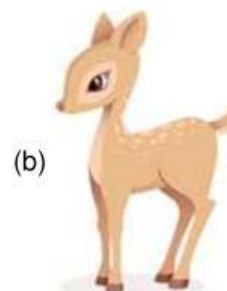
24. Given picture represents what kind of pollution?



(a) Noise Pollution

(b) Water Pollution

25. Which is the young one of deer?



Answers

1. (b), 2. (a), 3. (a), 4. (a), 5. (b), 6. (a), 7.(a), 8.(b), 9. (a), 10. (a), 11. (a), 12. (a),
13. (b), 14. (b), 15. (b), 16. (a), 17.(a), 18.(a), 19. (b), 20. (a), 21. (a), 22. (b), 23. (a),
24. (b), 25. (b)