

Area

Find the area of each shape below.

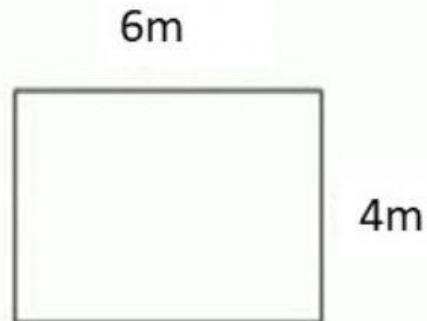
length \times width = area

1)



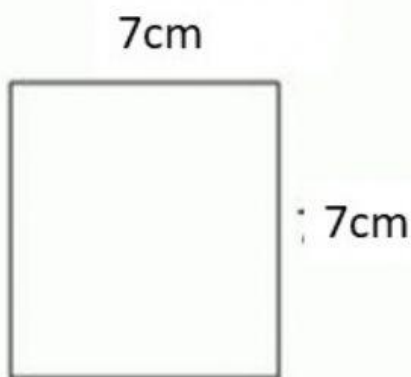
Area = _____ cm^2

2)



Area = _____ m^2

3)



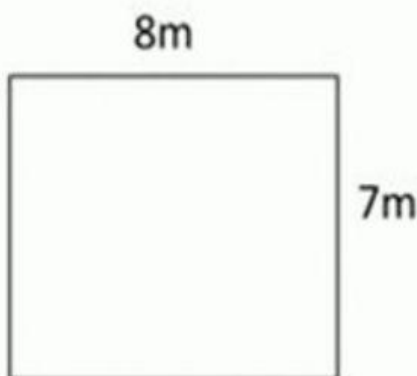
Area = _____ cm^2

4)



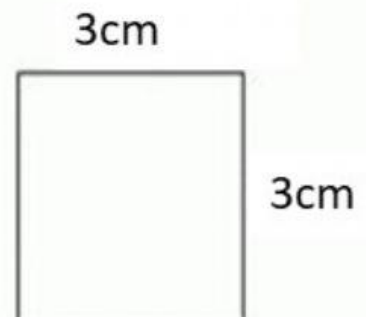
Area = _____ m^2

5)



Area = _____ m^2

6)



Area = _____ cm^2