

Addition and Subtraction Within 20

☐ Pre-assessment

☐ Individual guided practice

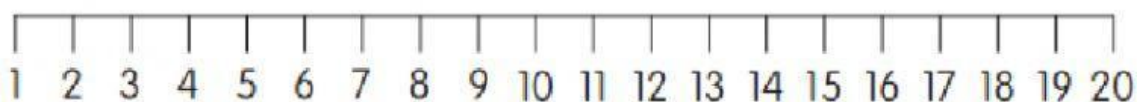
☒ Independent/fluency practice

☐ Formative Assessment

Adding Numbers Within 20

1 Add.

You may use the number line to help you.



(a) $8 + 3 =$

(b) $9 + 5 =$

(c) $7 + 6 =$

(d) $8 + 7 =$

(e) $11 + 4 =$

(f) $12 + 6 =$

(g) $13 + 4 =$

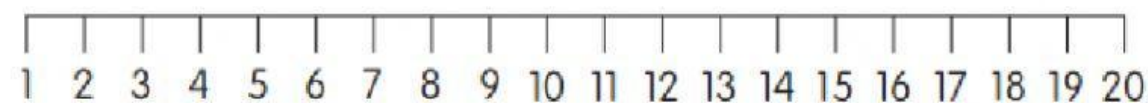
(h) $14 + 2 =$

(i) $15 + 3 =$

(j) $16 + 1 =$

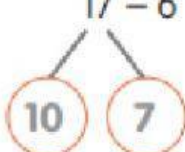
(k) $17 + 2 =$

(l) $18 + 1 =$



- 2** Write the missing numbers.
The first one has been done for you.

(a) $17 - 6$

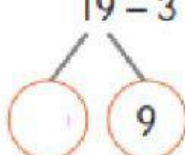


$$7 - 6 = 1$$

$$10 + 1 = 11$$

$$17 - 6 = 11$$

(b) $19 - 3$

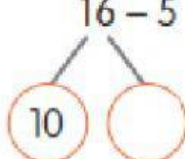


$$9 - 3 = \square$$

$$\square + \square = \square$$

$$19 - 3 = \square$$

(c) $16 - 5$

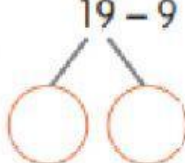


$$6 - 5 = \square$$

$$\square + \square = \square$$

$$16 - 5 = \square$$

(d) $19 - 9$



$$9 - 9 = \square$$

$$\square + \square = \square$$

$$19 - 9 = \square$$

Self reflection:

(Please Write A or B or C)



A. I can do the task



B. I need a little



C. I need a lot