

# Working with Numbers

## Number Line

1 2 3 4 5 6 7 8 9 10 11 12 13 14 15 16 17 18 19 20

## Numbers

Look at the number line. It shows the  1 to 20 in order. Some numbers are even and some numbers are odd. The  are blue and the  are red.

## Counting

Read the even numbers aloud. When there are a lot of things in a group, we can use the  to count the things by twos. This helps us to count fast.  by twos.





## Addition

We use  every day. It helps us count things.

We join groups of things with .

This is a   
It tells us to add the numbers together.

This is an   
It tells us that the numbers on both sides are the same amount.



This is the

We say, "Two plus three equals five."

We write ...


$$2 + 3 = 5$$

## Addition problems

Let's use addition to work out answers to these word

You have  orange seashells. I have  green seashells.


How many  do we have?



$$8 + 9 = 17$$

They have  red crabs,  blue crabs, and  yellow crabs.

How many  do they have?



$$6 + 5 + 4 = ?$$

How do you use addition every day?