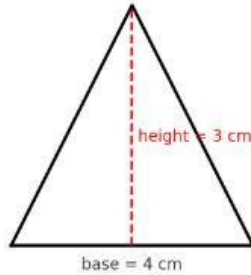


## Grade 6 - Area of Polygons (Interactive)

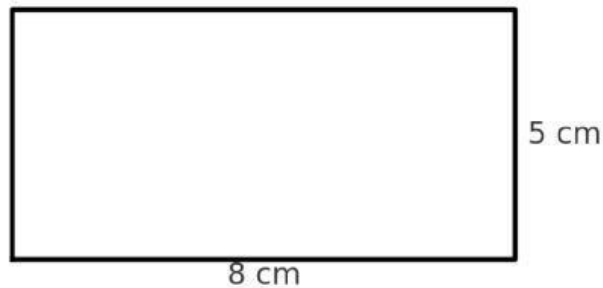
### 1. Find the area of the following shapes:

a) Triangle:



Area = \_\_\_\_\_

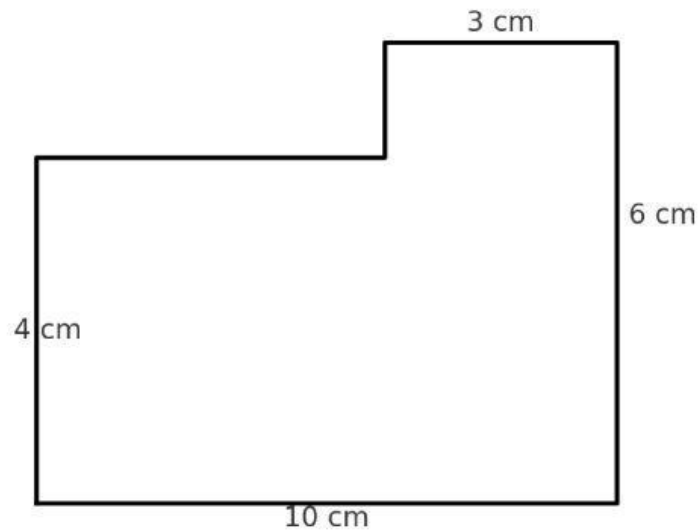
b) Rectangle:



Area = \_\_\_\_\_

## 2. Decompose the L-Shaped Figure

Break the L-shape into two rectangles. Find each area, then calculate the total area.



Rectangle 1 Area = \_\_\_\_\_  $\text{cm}^2$

Rectangle 2 Area = \_\_\_\_\_  $\text{cm}^2$

Total Area = \_\_\_\_\_  $\text{cm}^2$