



Notes on three ledger lines

- So far, we've met notes that use one or two ledger lines. Now we're going to add a third. Here are the notes that use up to **three** ledger lines above and below the stave:










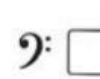














The image shows two musical staves. The top staff is in treble clef and contains notes on three ledger lines above the staff: E (first ledger line), F (second ledger line), G (third ledger line), A (first space), B (second space), C (third space), and then A (first space), B (second space), C (third space), D (first ledger line), E (second ledger line), and F (third ledger line). The bottom staff is in bass clef and contains notes on three ledger lines below the staff: G (third ledger line), A (second ledger line), B (first ledger line), C (first space), D (second space), E (third space), and then C (third space), D (second space), E (first space), F (first ledger line), G (second ledger line), and A (third ledger line).

- These notes may be sharpened or flattened by the addition of an accidental, or by a key signature.

Exercise 1 Write the name of each of these notes.

Exercise 1 consists of eight musical staves, each with a note on a ledger line. The staves are labeled a through h. Staff a shows a note on the first ledger line above the staff. Staff b shows a note on the first ledger line below the staff. Staff c shows a note on the first ledger line below the staff. Staff d shows a note on the first ledger line below the staff. Staff e shows a note on the first ledger line above the staff. Staff f shows a note on the first ledger line below the staff. Staff g shows a note on the first ledger line below the staff. Staff h shows a note on the first ledger line below the staff.

Exercise 2 Tick (✓) the correct clef needed to make each of these named notes.

a 	b 	c 	d 
<p>E</p> <p> <input type="checkbox"/>  <input type="checkbox"/></p>	<p>G</p> <p> <input type="checkbox"/>  <input type="checkbox"/></p>	<p>F</p> <p> <input type="checkbox"/>  <input type="checkbox"/></p>	<p>A</p> <p> <input type="checkbox"/>  <input type="checkbox"/></p>
e 	f 	g 	h 
<p>C</p> <p> <input type="checkbox"/>  <input type="checkbox"/></p>	<p>F</p> <p> <input type="checkbox"/>  <input type="checkbox"/></p>	<p>A#</p> <p> <input type="checkbox"/>  <input type="checkbox"/></p>	<p>E^b</p> <p> <input type="checkbox"/>  <input type="checkbox"/></p>