




Campbell Academy Foundation, Inc.
Asynchronous Activity in Numeracy
Lesson 17

What time is it?

Look at each clock. Click the time each shows.



3:00

2:00



10:00

8:00




6:00

7:00



5:00

2:00




3:00

9:00



11:00

12:00



4:00

2:00



3:00

1:00



10:00

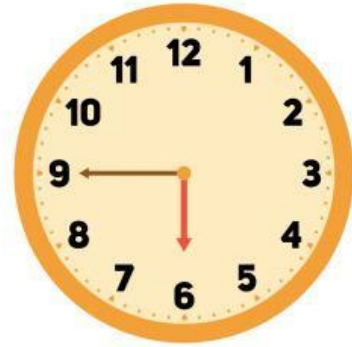
12:00

Identify if the clock is an Analogue or Digital clock.



Analogue Clock

Digital Clock



Analogue Clock

Digital Clock



Analogue Clock

Digital Clock



Analogue Clock

Digital Clock