




Campbell Academy Foundation, Inc.
Asynchronous Activity in Numeracy
Lesson 17

What time is it?

Look at each clock. Click the time each shows.




3:00

2:00



10:00

8:00




6:00

7:00



5:00

2:00




3:00

9:00



11:00

12:00



4:00

2:00



3:00

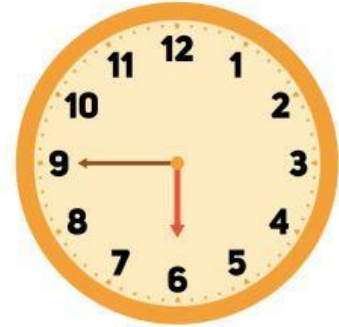
1:00



10:00

12:00

Draw a line and identify if the clock is an Analogue or Digital clock.



**Analogue
Clock**

**Digital
Clock**

