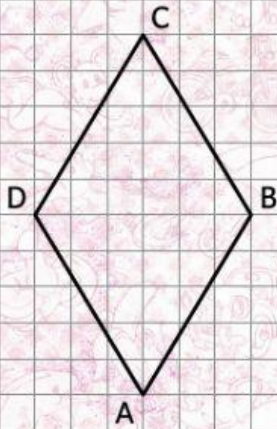


# I QUADRILATERI

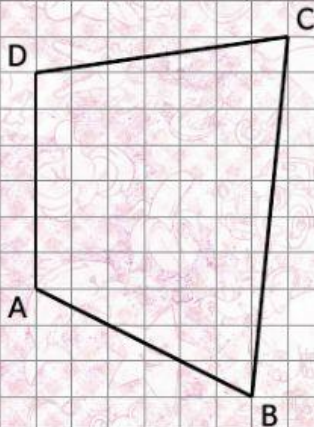


INDICA CON UNA CROCETTA LE RISPOSTE ESATTE.

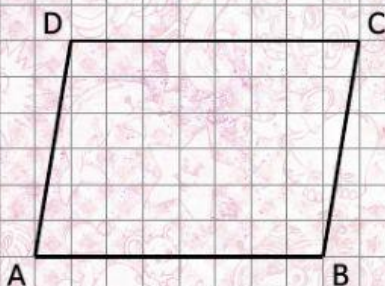
E' UN:



- ☐ TRAPEZIO RETTANGOLO
- ☐ TRAPEZIO ISOSCELE
- ☐ TRAPEZIO SCALENO
- ☐ QUADRILATERO
- ☐ AQUILONE
- ☐ PARALLELOGRAMMA



- ☐ TRAPEZIO RETTANGOLO
- ☐ TRAPEZIO ISOSCELE
- ☐ TRAPEZIO SCALENO
- ☐ QUADRILATERO
- ☐ AQUILONE
- ☐ PARALLELOGRAMMA



- ☐ TRAPEZIO RETTANGOLO
- ☐ TRAPEZIO ISOSCELE
- ☐ TRAPEZIO SCALENO
- ☐ QUADRILATERO
- ☐ AQUILONE
- ☐ PARALLELOGRAMMA