

**PACK: 1****TEAM: ..... - CLASS: .....****1****Watch the video and answer the question.  
How did she feel about the movie?**

Anna went to the cinema with her friends to watch a new movie. Everyone was excited, but the movie was very slow and didn't have much action. Anna kept looking at her watch and yawning during the film.

**Answer:****2****Choose 02 correct sentences.**

A. The girl who loves animals wants to be a vet.

B. We visited the park where we had our picnic last week.

C. The girl where loves animals wants to be a vet.

D. We visited the park which we had our picnic last week.

**3****Fill in the blanks**

The \_\_\_\_\_ provides the air that living things in the \_\_\_\_\_ need to survive.

A. atmosphere, biosphere,

B. Atmosphere, hydrosphere

C. Geosphere, biosphere

D. Hydrosphere, biosphere

**4**

**The Elfkin's dog can run at a speed of 130 kilometers per hour.  
How many meters does it run in one hour?**

**Answer:**

**PACK: 2****TEAM: ..... - CLASS: .....****1****Reorder the words to make a sentence.**

Elfkins

have

already

The

dinner.

their

before

cleaned

room

**2****Fill in the blanks with the correct word.**

take out

carpet

mow

The dishwasher

1. Dad will \_\_\_\_\_ the lawn this weekend.
2. I always empty \_\_\_\_\_ after dinner.
3. He forgot to \_\_\_\_\_ the trash, so the bin is full
4. We need to vacuum the \_\_\_\_\_ before our guests arrive.

**3****Question 3:****Answer**

If the ice melts, fresh water turns to salt water. Why is this bad?

**4****A jar of honey weighs 2.37 kilograms.  
How many grams is that?****Answer:**

## PACK: 3

TEAM: ..... - CLASS: .....

1

Watch the video and answer the question.  
How did she feel about the movie?

Ben and his friends were choosing a movie to watch during their sleepover. One friend wanted a cartoon, another wanted an action movie. But Ben said, "Let's watch something scary with monsters and ghosts!"

Answer:

2

Make a sentence with given words.

excited

fly the kite

3

Positive or negative

POSITIVE

NEGATIVE

1. Flushing trash down the toilet

3. Turning off faucet while brushing your teeth.

2. Using pesticides on crops.

4. Collecting rainwater to water plants.

4

In a science experiment, The Elfkens measured the growth of a cake over five days in fractions of an inch. They recorded their data on a line plot.

*Move the data onto the line plot.*

1/4

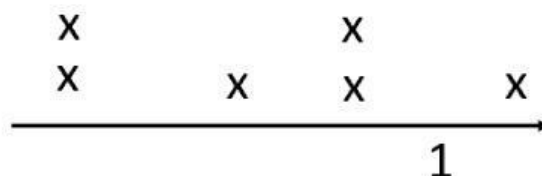
3/4

1/4

1/2

3/4

1 1/2



**PACK: 4**

**TEAM: ..... - CLASS: .....**

**1**

**Fill in the blank using present perfect**

.....  
.....  
a magic ball?



**2**

**Choose the correct answer**

A. Meeting a giant is my dream.

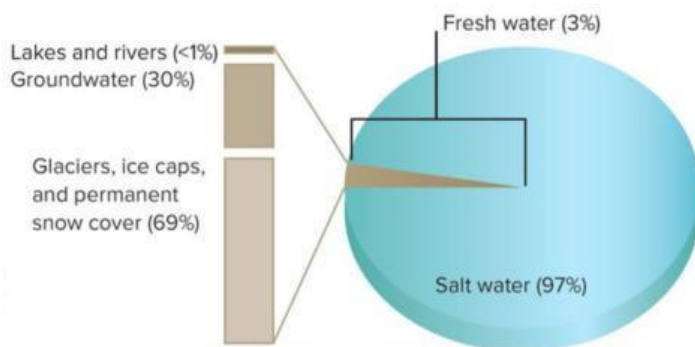
B. Meet a giant is my dream.



**3**

**Look at the map. True or False.**

Glaciers and ice caps make up 69% of all water on Earth.



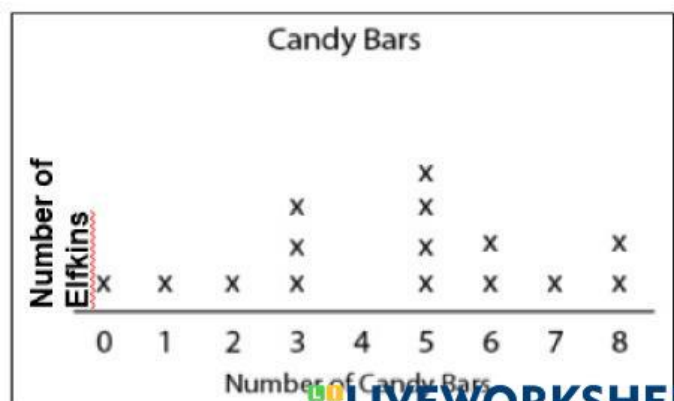
**Answer:**

**4**

**How many Elfkins ate 6 or more candy bars?**

Ate less than 3 candy bars: .....

Ate 6 or more candy bars?: .....



**PACK: 5****TEAM: ..... - CLASS: .....****1****Fill in the blanks.**

... .. the way on Google map is difficult for me. I have never ... .. the right way.

A. Finding - find

B. Find - found

C. Found - find

D. Finding - found

**2****Choose 02 correct sentences .**

A. The toy that is expensive belongs to Joe.

B. We visited the cinema where we watched a movie.

C. A. The toy who is expensive belongs to Joe.

D. We visited the cinema that we watched a movie.

**3****Look at the map. True or False.**

Which of the following is an example of the hydrosphere interacting with the atmosphere?

A. Rain falls from clouds into oceans and rivers.

B. A lion drinking water from a stream.

C. Rocks breaking into smaller pieces over time.

D. Fish swimming in the pond.

**4**

**The Elfkin's dog has a mass of 5.58 kilograms.  
How many grams is the mass of The Elfkin's dog?  
Answer:**

## PACK: 1

TEAM: ..... - CLASS: .....

1

Watch a video and answer:

Lina's family bought a lot of fruits and vegetables from the market. They knew they couldn't eat everything right away, so Lina's mom put some in the freezer and made jam with the rest. That way, the food would last longer.

Answer:

2

Unscramble.

the

hour.

Helvi

one

challenged

in

herself

finish

puzzle

under

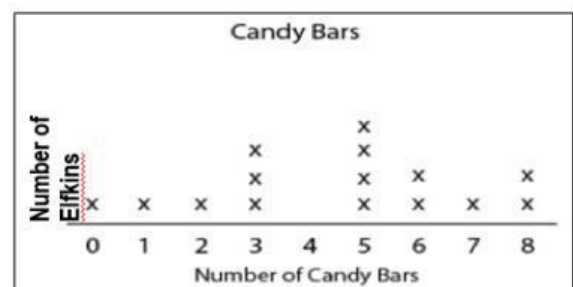
to

3

How many Elfkins ate less than 3 candy bars?

How many Elfkins ate 6 or more candy bars?

Ate less than 3 candy bars: .....



4

Fill in the blanks

The \_\_\_\_\_ provides the air that living things in the \_\_\_\_\_ need to survive.

- A. atmosphere, biosphere,
- B. Atmosphere, hydrosphere
- C. Geosphere, biosphere
- D. Hydrosphere, biosphere

**PACK: 2****TEAM: ..... - CLASS: .....****1****Fill in the blanks with the correct form of the verb.****create****discover****preserve****develop**

We need to \_\_\_\_\_ nature so that animals have a safe place to live.  
When we recycle and plant trees, we help \_\_\_\_\_ a better world for everyone. Every small action makes a big difference!

**2****Make a passive sentence with the given words.****create****project****3****The Elfkins cut their cake into different amounts.****Match the equations to the answer representation.**

$$1/3 \div 3$$

$$1/2 \div 4$$

$$1/5 \div 2$$

$$1/2 \div 3$$

**4****Answer**

If the ice melts, fresh water turns to salt water. Why is this bad?

## PACK: 3

TEAM: ..... - CLASS: .....

1

Choose the correct word to fill in the blank.

concussion

cut

rash

burn

1. I got a small \_\_\_\_\_ on my finger while using scissors.
2. He got a \_\_\_\_\_ on his hand from touching the hot pan.
3. She had a red \_\_\_\_\_ on her arm after playing in the grass.
4. The player had a \_\_\_\_\_ after hitting his head during the game.

2

Watch the video and answer

What did he have to bring?

Tom was going on a camping trip with his family deep in the forest. They planned to stay overnight in a tent. There were no lights around, and it would get very dark after sunset.

Answer:

3

The Elfkins have 7 pounds of flour. Each cake needs  $\frac{1}{4}$  pound of flour. How many cakes can be made with the available flour?

Answer:



4

Positive or negative

POSITIVE

NEGATIVE

1. Flushing trash down the toilet

3. Turning off faucet while brushing your teeth.

2. Using pesticides on crops.

4. Collecting rainwater to water plants.

**PACK: 4**

**TEAM: ..... - CLASS: .....**

**1**

**Watch the video and answer. What problem with Alex?**

During a soccer game, Alex accidentally hit his head on the ground after falling. He felt dizzy and couldn't remember what happened. The coach quickly took him to the nurse.

**Answer:**

**2**

**Match.**

1. Trees are planted

2. Recyclable materials

3. Plastic bags

4. New parks

**a. were built** to give children a safe place to play.

**b. were banned** in our town last year.

**c. in many cities** to keep the air clean.

**d. are collected** every week by the community.

**3**

**The Elfkin's are making cakes, and each recipe requires  $2 \frac{1}{3}$  cups of flour. If they bake  $3 \frac{1}{2}$  cakes, how many cups of flour will they use in total?**

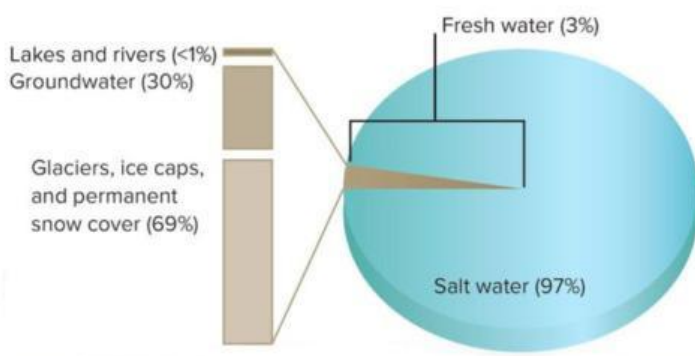
**Answer:**



**4**

**Look at the map. True or False.**

Glaciers and ice caps make up 69% of all water on Earth.



**Answer:**

**PACK: 5****TEAM: ..... - CLASS: .....****1**

Make 01 simple present passive sentence with the rule in the swimming pool.

**Answer:****2**

**What should the students do during the fire drill?**

During a school fire drill, the alarm suddenly rang loudly. Some students started to panic and talk loudly. The teacher raised her hand and said, "Don't worry, it's just a drill. Let's walk outside quietly and safely."

**Answer:****3**

**Helvi walks  $\frac{1}{7}$  mile from her house to her friend's house. Then they walk  $\frac{2}{5}$  mile from her friend's house to the park.**

**How far did Helvi walk?**

**Answer:****4**

**Look at the map. True or False.**

Which of the following is an example of the hydrosphere interacting with the atmosphere?

- A. Rain falls from clouds into oceans and rivers.
- B. A lion drinking water from a stream.
- C. Rocks breaking into smaller pieces over time.
- D. Fish swimming in the pond.

**PACK: 6**

**TEAM: ..... - CLASS: .....**

**1**

Make 01 past passive sentence to tell an accident you had.

Answer:

**2**

When you were young, what didn't you have to do?

Answer:

**3**

The Elfkins had  $6 \frac{1}{7}$  muffins for a party. After The Elfkins ate the muffins, they had  $3 \frac{1}{3}$  left. How many muffins did The Elfkins eat?

Answer:



**4**

In what sphere are the Elfkins flying?



Answer:

**PACK: 7****TEAM: .....- CLASS: .....****1****Match.**

- |                                |                                                                              |
|--------------------------------|------------------------------------------------------------------------------|
| 1. Preserve                    | A) To learn or find something for the first time.                            |
| 2. Cross a bridge              | B) To save or protect something from being damaged or lost.                  |
| 3. Develop building techniques | C) To move from one side of something to the other, such as a river or road. |
| 4. Discover fire               | D) To create or improve methods for constructing buildings.                  |

**2****Unscramble.**

He    to    had    wear    a    to    warm.    keep  
jacket    him

**Answer:****3**

The Elfin's dog has a mass of 5.58 kilograms.  
How many grams is the mass of The Elfin's dog?

**Answer:****4****Match.**

- |                                            |                               |
|--------------------------------------------|-------------------------------|
| 1. A tree growing roots in the soil        | A. Biosphere and Hydrosphere  |
| 2. Plants releases oxygen                  | B. Biosphere and Geosphere    |
| 3. A hurricane over the ocean              | C. Atmosphere and Hydrosphere |
| 4. A rabbit drinking water from the stream | D. Biosphere and Atmosphere   |

**PACK : 8****TEAM: ... .. - CLASS : ... ..****1****Match.**

1. The homework is

2. The books

3. The letter

4. The houses

a. was sent by the teacher yesterday.

b. done by the students every week.

c. are read in the library every month.

d. Were cleaned by the cleaner last week,

**2****Make a sentence with present passive about a sign.****Answer:****3****The Elfkin's dog can run at a speed of 130 kilometers per hour. How many meters does it run in one hour?****4****True or False****True / False: The atmosphere is the layer of gases that surrounds Earth.**