

Name:

Class:

MOCK TEST 2

Time allowance: 35 minutes

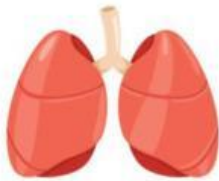

1. Read the description. Write the correct word. There is one extra word.

balanced	diet	filter	force
----------	------	--------	-------

- a. : a push or a pull
- b. : to contain the correct types and amounts of food.
- c. : to remove dirt or other solids from liquids or gases.

2. Use the given words to complete the table.

brain	heart	lungs	kidneys	stomach	intestine
-------	-------	-------	---------	---------	-----------

Picture of organ	Name
	
	

3. Read the statements. Choose True or False.

- | | | |
|--|-------------|--------------|
| a. All metals are magnetic materials. | True | False |
| b. Proteins help build muscles. | True | False |
| c. Our heart beats slower, and we breathe less when we exercise. | True | False |

d. This person has a balanced diet and exercises regularly.



True

False

e. Our bodies are divided into three main sections.

True

False

4. Choose the correct answer.

a. Fruits and vegetables contain lots of

A. carbohydrates

B. vitamins and minerals

C. proteins

b. Too much friction is not useful when we

A. go skiing

B. walk on rainy days

C. stop a bike



c. Ahmed needs to lose some weight. Which plate of food should he choose?

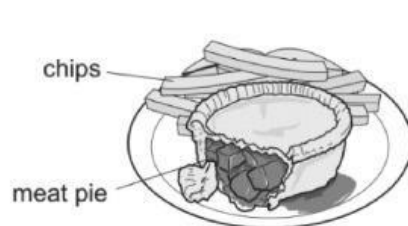


plate A

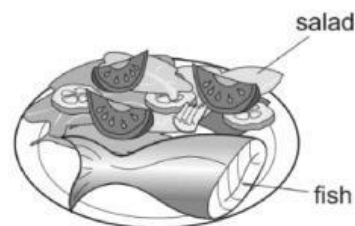


plate B

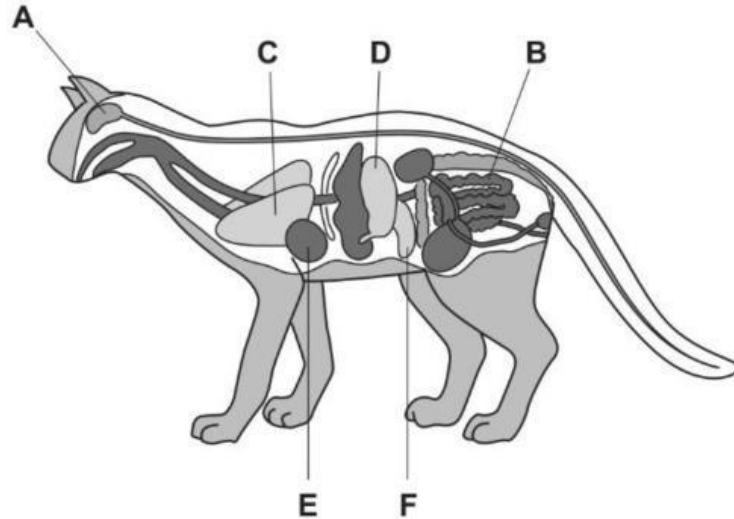
A. Plate A

B. Plate B

C. Both are correct.

d. Humans have organs inside their bodies. Cats have similar organs inside their bodies.

Which organ digests the food the cat eats? Circle the correct letter(s).





e. We lose water when we

- A. go to sleep
- B. breathe
- C. sweat and go to the toilet

f. These two magnets will

- A. attract each other
- B. repel each other
- C. change each other's shape



5. Choose the correct word to complete the sentence.

- a.** The **heart** / **brain** controls many activities that we do.
- b.** A **push** / **pull** moves the object toward you.
- c.** Without **water** / **food**, the cells in our bodies dry up, and the life process cannot take place.
- d.** We need **different** / **one** type(s) of food to keep us alive and grow.

6. Ross finds this label on a packet of food.

Is this food a healthy choice? Explain.

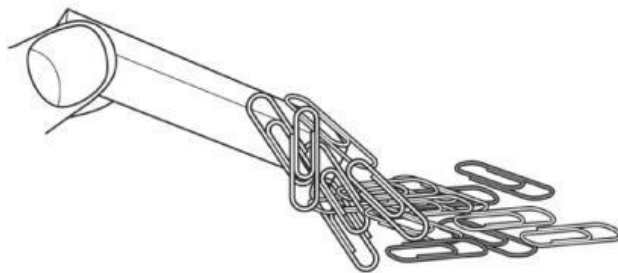
This food is
because it contains.....
.....
.....

LOW	Fat 6.4 g per serving
LOW	Saturates 1.8 g per serving
HIGH	Sugars 41.5 g per serving
MED	Salt 1.9 g per serving
280 Calories per serving	

7. Blessy uses a magnet to attract paper clips.

This magnet only attracts five paper clips. The other clips are not attracted.

What materials might the other clips be made of?



8. Look at the picture and answer the questions.



a. What organ is it?

b. Where is it? Circle.

head

chest

abdomen

c. What is its function?

.....
.....