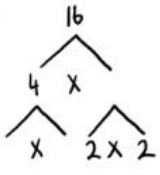


G5 Greatest Common Factor Revision PART 2

Name: _____

Find the GCF of each set of numbers.

10. 16, 52, 76 _____

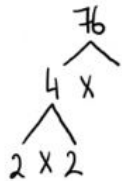
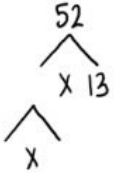


16: ____ x ____ x ____ x ____

52: ____ x ____ x ____

76: ____ x ____ x ____

GCF: ____ x ____ = ____



Test Practice

6. Rashid will share his collection with his friends so that they each receive the same number of cards. What is the greatest number of cards they will each receive?

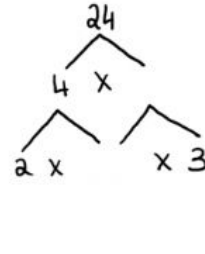
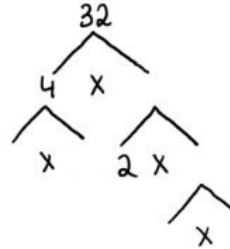
Sports Cards	
Type	Number
Cricket	32
Football	24

Ⓐ 4 cards

Ⓒ 12 cards

Ⓑ 8 cards

Ⓓ 16 cards



32: ____ x ____ x ____ x ____ x ____

24: ____ x ____ x ____ x ____

GCF: ____ x ____ x ____ = ____