

Which expression has been solved with the following number line?



Choose 1 answer:


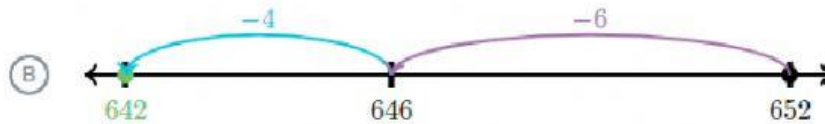
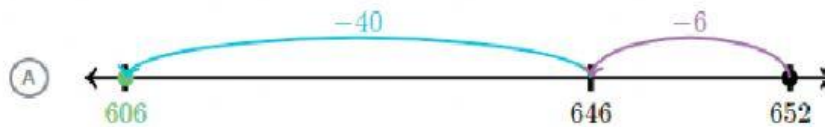
(A) $149 - 68$

(B) $194 + 608$


(C) $194 - 68$

Which number line shows $652 - 640$?

Choose 1 answer:



Which expression has been solved with the following number line?



Choose 1 answer:

☐ (A) $323 - 207$

☐ (B) $323 + 207$

☐ (C) $323 - 270$