

REVISION OF UNITS 7, 8





1. Find the perimeter and the area of these squares.





	a.	b.	c.
Side	3m	4m	8m
Perimeter	$3 \times 4 = 12\text{m}$		
Area	$3 \times 3 = 9\text{m}^2$		

2. Find the perimeter and the area of these rectangles.

	a.	b.
Length	7cm	10cm
Width	5cm	5cm
Perimeter	$(7 + 5) \times 2 = 24\text{cm}$	
Area	$7 \times 5 = 35\text{cm}^2$	



3. Look and match.

A line connects the apple with VIII to the label 'eight'.

4. Look and answer the questions.

Fruits	Minh	Lan	Phong
	2	4	1
	3	5	7

a) How many apples does Minh have?

- Minh has 2 apples.

b) How many bananas does Phong have?

_____.

c) How many apples do Minh and Phong have altogether?

_____.

d) How many bananas do they have in total?

_____.