

## ELAPSED TIME

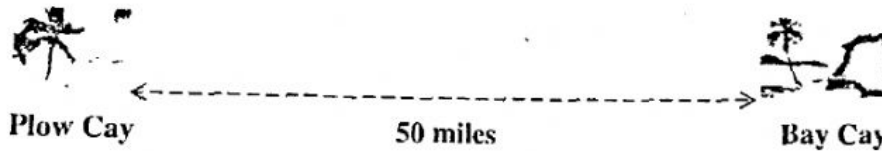
A boy leaves home at 7:58 a.m. and arrives at school at 8:20 a.m. How long did it take him to arrive at school?

Answer: \_\_\_\_\_ [2]



Stan arrived at the airport at 5:20 pm. His plane is due to leave at 8:10 pm. How long will Stan have to wait before his plane leaves?

Answer: \_\_\_\_\_ [2]



Sam left Plow Cay in his boat at 8 a.m. He arrived at Bay Cay at 11:30 a.m.

(a) How long was his trip?

Answer: \_\_\_\_\_ [1]

## ELAPSED TIME



A flight leaves at 2:25 p.m. to travel from Presley to Newsley. The flight takes 7 hours and 13 minutes.

- (a) Calculate at what time the plane should arrive at Newsley.

Answer: \_\_\_\_\_ [2]

- (b) Write your answer from (a) in 24-hour clock time.


Answer: \_\_\_\_\_ [1]

The table below shows the time schedule of a bus. Fill in the information for (a), (b) and (c).

Journey Begins	Time Taken	Journey Ends
9:20	35 minutes	(a)
4:11	(b)	5:13
(c)	55 minutes	8:55

[3]

## ELAPSED TIME



The clock is seven minutes slow. What is the correct time when the clock shows 6:59?

Answer: \_\_\_\_\_ [2]




← 11 minutes walking distance. →



It takes Andrea 11 minutes to walk from her house to the Bus Stop. She arrives at the stop 8 minutes too early for the 11:15 a.m. bus. At what time did she leave home?

Answer: \_\_\_\_\_ a.m. [3]



A bus leaves the station every 20 minutes. The first bus leaves at 8:55 am. At what time is the third bus scheduled to leave the station?

Answer:

13