

Escola: _____

Nome: _____


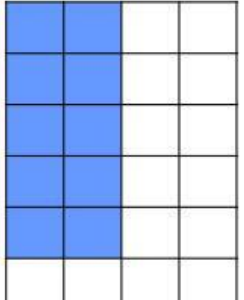
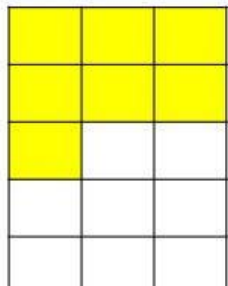
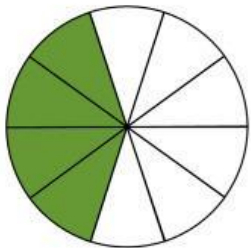

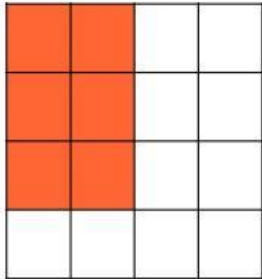

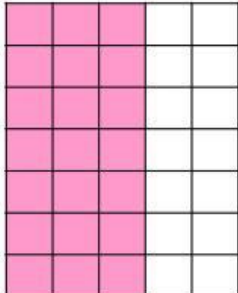
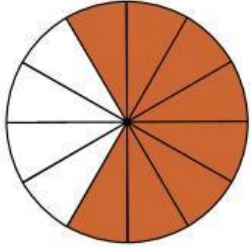
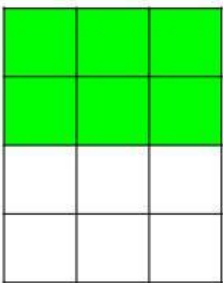
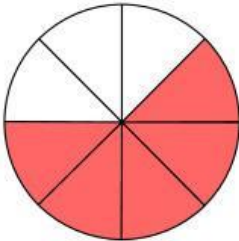
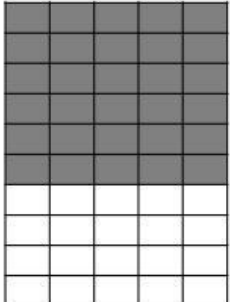
Data: _____, ____ de _____ de _____.

Turma: _____ Professor(a): _____

Escreva a

FRAÇÃO

que corresponde à região colorida.

<p>a.</p> <p>_____</p> 	<p>b.</p> <p>_____</p> 	<p>c.</p> <p>_____</p> 
<p>d.</p> <p>_____</p> 	<p>e.</p> <p>_____</p> 	<p>f.</p> <p>_____</p> 
<p>g.</p> <p>_____</p> 	<p>h.</p> <p>_____</p> 	<p>i.</p> <p>_____</p> 
<p>j.</p> <p>_____</p> 	<p>k.</p> <p>_____</p> 	<p>l.</p> <p>_____</p> 

Escola: _____

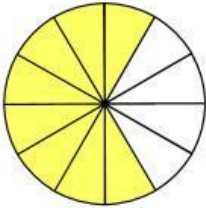

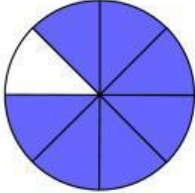
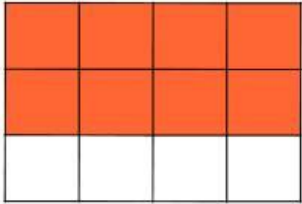
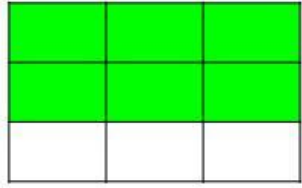
Nome: _____

Data: _____, ____ de _____ de _____.

Turma: _____ Professor(a): _____

Observe o exemplo e complete a tabela de acordo com as imagens das

FRAÇÕES

	Fração	Numerador	Denominador	Leitura
a. 	$\frac{8}{12}$	8	12	Oito doze avos
b. 				
c. 				
d. 				
e. 				
f. 